



Seat No.	
-------------	--

B.Sc. – I (ECS) (Semester – I) (CGPA Pattern) Examination, 2015
Paper – I : ENGLISH – I (Compulsory)
‘On Track’ English Skills for Success

Day and Date : Thursday, 29-10-2015
Time : 10.30 a.m. to 1.00 p.m.

Max. Marks : 70

N.B. : 1) ***All questions are compulsory.***
2) ***Figures to the right indicate full marks.***

1. Rewrite the following sentences by choosing the correct alternative : **14**
- 1) The man from the west lived in the city of _____ after moving away from New York.
 - a) Washington
 - b) Mexico
 - c) Chicago
 - d) New Jersey
 - 2) The note that the man from the west received was in fact from _____.
 - a) his friend Jimmy
 - b) his wife
 - c) Chicago police
 - d) the owner of the restaurant
 - 3) In the end the narrator refused to accept all of Miss Krishna’s possession except _____.
 - a) a cigarette lighter
 - b) a little nine-inch clock
 - c) a tiny glazed coffee cup
 - d) a small Burmese box
 - 4) The writer’s attitude towards Miss Krishna was one of _____.
 - a) deep affection and admiration
 - b) apathy and patience
 - c) hatred and contempt
 - d) tolerance and patience



- 5) The word 'almighty tool' refers to _____
a) a scientific tool b) an electronic tool
c) an all powerful method d) the almighty god
- 6) 'The Myth of Artificial Intelligence' is written by _____
a) Anita Desai b) Attila Narin
c) Nargis Dalal d) Dr. Abdul Kalam
- 7) The phrase 'like the flame of her marriage' is the _____ used in the poem.
a) simile b) metaphor
c) personification d) alliteration
- 8) In the poem 'Bangle Sellers', bangles are token of _____
a) freedom b) sacrifice
c) shackles d) prosperity
- 9) The words 'Kiltartan cross' refer to _____
a) a well known place in Ireland b) an Irish Church
c) the battle field d) a pilgrim place
- 10) Kedar painted the picture _____
a) hisself b) herself c) himself d) itself
- 11) The population of the tiger has increased in India.
The underlined word is a _____ noun.
a) proper b) common c) collective d) material
- 12) _____ Hutatma express runs between Solapur and Pune.
a) A b) An c) The d) No article
- 13) My brother returned home _____ 10 P.M.
a) on b) in c) at d) to
- 14) Mrs. Khanna looked _____ the orphan child after his parents death.
a) after b) about c) at d) for

2. Answer in brief **any seven** of the following questions :

14

- 1) Why did Jimmy send another police officer to arrest Bob ?
- 2) What had happened to 'Big Joe Brady's restaurant ?
- 3) What is the narrator's initial opinion of Miss Krishna ?



- 4) Why does the narrator decide to terminate Miss Krishna's stay at her house ?
 - 5) What are the many facets of intelligence ?
 - 6) Why can computers 'not think' in the same way as human being ?
 - 7) Which colours of bangles are suitable for a maiden's wrist ?
 - 8) How does the Irish Airman imagine he will die ?
3. A) Write short paragraphs on **any two** of the following : **8**
- 1) Importance of tree plantation
 - 2) My hobby
 - 3) Solar energy.
- B) Answer **any two** of the following questions in about **eight** lines **each** : **6**
- 1) What sort of relationship did Bob and Jimmy share ?
 - 2) How did Krishna's sister behave with the narrator ?
 - 3) What image of bangle sellers at the temple do you gather from the poem ?
4. Write an essay on **any one** of the following : **14**
- 1) The reasons of farmers suicides.
 - 2) The role of youth in nation building.
5. Read the following passage and make notes of it. Use an appropriate title for your notes. **14**

Advertising is the way in which the manufacturer is able to communicate with his customer. In India it is a gigantic task, when one remembers that there are nearly 400 million potential customers. Not all of them yet have reached the stage, when they have money for more than the barest minimum of goods and clothing but many have already started earning enough money to allow them to look for some modest improvement in their living standards. Thus, purchasing power is sure to increase as India's plans develop. More customers will be created, and it is through advertising that they will learn how their new earnings can buy them a fuller life.

Now, let us look for a moment at how advertising works – how it tells people about goods which will make the world a more comfortable place for them to live in. To be effective, advertising must first attract attention, but more important, it



must be noticed by people in the right way. Advertisements which clamour our for attention in a cheap or vulgar way do not bring any credit to the products they sell. Just as in life it is easy to be noticed, but, less easy to be respected; so it is with advertising. You can print your advertisement upside down and it will attract a lot of attention, but that does not mean that people will think more of the product. That is why the advertiser has to be very careful about humour, if he makes a reader laugh, he must be sure to see the laugh is not at the expense of the product. That does not mean humour has no place in advertising. It can brighten advertising and make it memorable.

The real job of the advertisement is to sell. It has to be convincing. Market research has revealed the needs and desires of the customers and the product has been designed to meet those needs. Now, the advertising must base itself on that research and must explain to the consumer how the product is going to benefit them.

All advertising must reach the right people. There are a number of ways communicating with the potential customers advertising media they are called they are the newspapers and magazines, cinema advertising, shop display material, posters and soon. The job of combining the right media to reach the greatest number of potential customers with the right sort of impact at the lowest cost is an intricate and important one.



Seat No.	
----------	--

**B.Sc. (E.C.S.) – I (Semester – I) (CGPA Pattern) Examination, 2015
COMPUTER FUNDAMENTALS AND PROGRAMMING USING C – I
(Paper – II)**

Day and Date : Friday, 30-10-2015

Max. Marks : 70

Time : 10..30 a.m. to 1.00 p.m.

- N. B. :** 1) **All questions are compulsory.**
2) **Figures to the right place indicate full marks.**
3) **Answer of two Sections should be written in separate answer sheet.**

**SECTION – I
(Computer Fundamentals)**

1. Multiple choice questions : 5

- i) _____ performs all type of data processing operations.
 - a) CPU
 - b) Operating system
 - c) Program
 - d) Antivirus
- ii) _____ is not input device.
 - a) Digitizer
 - b) Scanner
 - c) Lightpen
 - d) Plotter
- iii) _____ represents the physical and tangible component of computer.
 - a) Software
 - b) Ram
 - c) Hardware
 - d) Printer
- iv) The computers of fourth generation used _____ circuits.
 - a) Transistor
 - b) VLLI
 - c) ULSI
 - d) VLSI
- v) _____ is the extension of batch file.
 - a) .doc
 - b) .bat
 - c) .XLS
 - d) .ppt

2. Answer **any five** of the following : 10

- i) What is the difference between primary and secondary storage device ?
- ii) Define the term interpreter and compiler.
- iii) Explain limitation of computer.
- iv) Explain features of operating system.



- v) Explain :
- 1) Type
 - 2) Copy con.
- vi) Give long form of ASCII, BCD.
- vii) Explain advantages of fifth generation of computer.
3. A) Write short notes on **any two** of the following : 10
- i) What is memory and its types ?
 - ii) Explain output devices in details.
 - iii) Explain single user and multi user operating system.
- B) Answer **any one** of the following : 10
- i) Explain evaluation of computer.
 - ii) What is DOS ? Explain internal and external commands in details.

SECTION – II
(Programming Using C – I)

1. Multiple choice questions : 5
- i) Define directive is end with semicolon.
- a) True b) False.
- ii) void main ()
- ```
{
 int i;
 scanf ("%3d", & i);
 printf ("%d",i);
}
```
- if user enter 1001 then O/P is \_\_\_\_\_
- a) 1                      b) 10                      c) 100                      d) 1001
- iii) \_\_\_\_\_ is derived data type.
- a) float                      b) int                      c) array                      d) none
- iv) \_\_\_\_\_ is not character of 'C' language.
- a) ^                      b) ~                      c) |                      d) \$
- v) \_\_\_\_\_ string function accept only one parameter.
- a) strlen                      b) strcpy                      c) strcat                      d) strcmp



2. Answer **any five** of the following : **10**
- i) Give the list of tokens used in a 'C' language.
  - ii) Explain the rules of identifier.
  - iii) What is array ? Give the types of array.
  - iv) C is the middle level language. Comment on it.
  - v) Give the list of symbolic constant.
  - vi) Define the variable and constants.
  - vii) Why size of operator is used in C language ?
3. A) Write short notes on **any two** of the following : **10**
- i) What is string ? Explain inbuilt string function in details.
  - ii) What is algorithm ? Write a algorithm to find out sum of digits.
  - iii) Write a program to find out factorial number of entered number.
- B) Answer **any one** of the following : **10**
- i) What is array ? Explain types of array with examples.
  - ii) Write a program to find the first 20 palindrome numbers.
-



|             |  |
|-------------|--|
| Seat<br>No. |  |
|-------------|--|

**B.Sc. (ECS) – I (Semester – I) Examination, 2015  
(CGPA Pattern)  
ELECTRONICS (Paper – III)  
Linear and Digital Electronics – I**

Day and Date : Saturday, 31-10-2015

Max. Marks : 70

Time : 10.30 a.m. to 1.00 p.m.

- Instructions :** 1) *All questions are compulsory.*  
2) *Figures to right indicate full marks.*  
3) *Draw circuit diagram wherever necessary.*

**SECTION – I  
(Linear)**

1. Multiple choice questions :

5

- i) Transformer transfers energy from primary to secondary as \_\_\_\_\_  
a) ac to ac                      b) dc to ac                      c) dc to dc                      d) ac to dc
- ii) LCR series resonant circuit acts as \_\_\_\_\_  
a) rejector ckt.                      b) acceptor ckt.  
c) rectifier ckt.                      d) none
- iii) The potential barrier of a p-n junction is due to \_\_\_\_\_  
a) majority carriers                      b) minority carriers  
c) fixed donor and acceptor ion                      d) both b and c
- iv) Collector-base junction of a transistor is always \_\_\_\_\_  
a) forward biased                      b) reverse biased  
c) zero biased                      d) none
- v) Point of intersection of dc and ac load lines is the \_\_\_\_\_  
a) operating point                      b) max. collector current point  
c) mid point                      d) none

P.T.O.





2. Answer **any five** of the following : 10
- i) Explain relation between  $\alpha$  and  $\beta$ .
  - ii) Explain seven segment display.
  - iii) Explain terms :
    - a) Rectification
    - b) Ripple factor.
  - iv) Draw diagram of half wave rectifier.
  - v) Draw symbol of NPN and PNP transistor.
  - vi) What is transistor ? Why is it so called ?
  - vii) What is capacitor ? What is capacitance ?
3. A) Write short notes on **any two** of the following : 10
- i) Explain basic relationship in transformer.
  - ii) State and explain Norton's theorem with example.
  - iii) Explain p-n junction diode.
- B) Answer **any one** of the following : 10
- i) Explain CE characteristics of transistor and also explain the active, cut-off and saturation regions for a transistor.
  - ii) What is voltage regulator ? Explain Zener diode as voltage regulator and also explain IC 78XX and 79XX series.

SECTION – II  
(Digital Electronic – I)

1. Multiple choice questions : 5
- i) \_\_\_\_\_ is a unweighted code.
    - a) octal
    - b) grey
    - c) decimal
    - d) binary
  - ii) The base of hexadecimal number system is \_\_\_\_\_.
    - a) 6
    - b) 8
    - c) 16
    - d) 10
  - iii) NAND gate is equivalent to \_\_\_\_\_ gate.
    - a) Bubbled OR
    - b) Bubbled AND
    - c) XOR
    - d) EX-NOR



- iv) IC 74138 is \_\_\_\_\_ decoder.
  - a) Binary to octal
  - b) Octal to binary
  - c) Octal to BCD
  - d) None
- v) In combinational circuits the output at any instant of time depend upon the \_\_\_\_\_ inputs.
  - a) present
  - b) present and past
  - c) previous o/p
  - d) none

2. Answer **any five** of the following :

10

- i) Convert  $(11001.101)_2$  into decimal.
- ii) Convert following hexadecimal into decimal
  - a) E9A
  - b) F4B.
- iii) Draw diagram of parallel adder.
- iv) State the features of logic families and explain any two of them.
- v) Draw diagram of IC 74148.
- vi) Explain any four Boolean identities.
- vii) Draw k-map for following truth table and simplify.

| A | B | C | Y |
|---|---|---|---|
| 0 | 0 | 0 | 1 |
| 0 | 0 | 1 | 0 |
| 0 | 1 | 0 | 0 |
| 0 | 1 | 1 | 1 |
| 1 | 0 | 0 | 0 |
| 1 | 0 | 1 | 0 |
| 1 | 1 | 0 | 1 |
| 1 | 1 | 1 | 0 |



3. A) Write short note on **any two** of following : **10**

- i) Draw and explain 8 : 1 multiplexer with truth table.
- ii) Explain priority encoder.
- iii) Draw k-map and simplify following equation

$$Y = \overline{A} \overline{B} \overline{C} \overline{D} + \overline{A} \overline{B} \overline{C} D + \overline{A} \overline{B} C \overline{D} + A \overline{B} C \overline{D} .$$

B) Answer **any one** of the following : **10**

- i) Explain hamming code and construct hamming code for 1001 using even parity and also find the correct data if hamming code received is 0010001 with even parity.
  - ii) Explain half adder and full adder.
-



|          |  |
|----------|--|
| Seat No. |  |
|----------|--|

**B.Sc. (ECS) – I (Semester – I) (C.G.P.A. Pattern) Examination, 2015  
MATHEMATICS (Paper – IV)  
Graph Theory and Numerical Methods**

Day and Date : Monday, 2-11-2015  
Time : 10.30 a.m. to 1.00 p.m.

Max. Marks : 70

- N.B. :** 1) Write answers of Section – I and Section II on **separate** answer books.  
2) **All** questions are **compulsory**.  
3) **Use** of scientific calculators are **allowed**.  
4) Figures to the **right** indicate **full** marks.

**SECTION – I  
(Graph Theory)**

1. Multiple choice questions.

5

- 1) A vertex of degree zero is called \_\_\_\_\_ vertex.  
a) One                      b) Pendant                      c) Isolated                      d) None of these
- 2) The complement of a null graph is \_\_\_\_\_ graph.  
a) complete                      b) regular                      c) simple                      d) none of these
- 3) A single vertex together with loop is a cycle of length \_\_\_\_\_  
a) one                      b) two                      c) zero                      d) three
- 4) A path in G which covers all edges of G is called \_\_\_\_\_  
a) Eulerian path                      b) Hamiltonian path  
c) Euler circuit                      d) None of these
- 5) A tree whose center is a single vertex is called \_\_\_\_\_  
a) unicentral                      b) bicentral                      c) tricentral                      d) none of these

2. Answer **any five** of the following :

10

- i) Find the number of edges in a graph G with 4 vertices in which two vertices have degree 3 and two vertices have degree 2.
- ii) Define self complementary graph.
- iii) Define edge connectivity with suitable example.

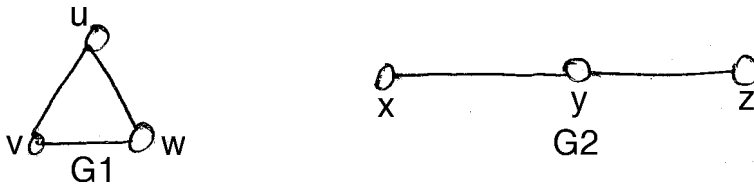
P.T.O.



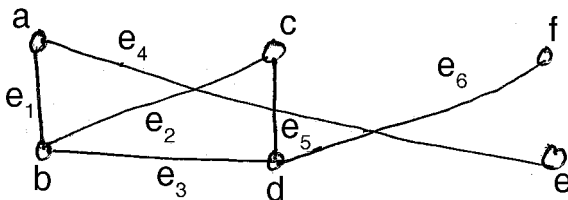
- iv) Draw a graph which is Eulerian but not Hamiltonian.
- v) Define spanning tree with suitable example.
- vi) Which algorithm is used for finding the shortest spanning tree of a given weighted connected graph.
- vii) Draw the graphs  $k_{2,4}$  and  $k_{3,2}$ .

3. A) Attempt **any two** from the following : 10

- i) Write a note on Koningsberg's 7-bridges problem.
- ii) Find and draw  $G1 \times G2$  for the following pairs of graphs.

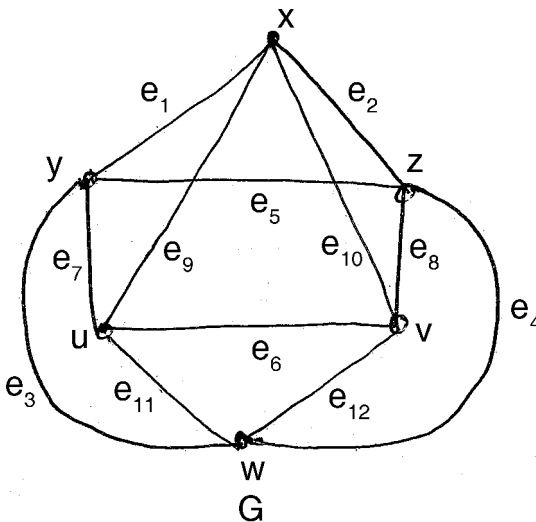


- iii) Define Isthmus and cut vertex. Find the all bridges and cut vertices in the following graph.



B) Attempt **any one** from the following : 10

- i) Show that the following graph is Eulerian and hence by using Fleury's algorithm to trace.







- iv) Show that  $(1 + \Delta) f(x) = E f(x)$ .
- v) State the formula for  $k_1, k_2, k_3$  and  $k_4$  in Runge Kutta 4<sup>th</sup> order method.
- vi) Write trapezoidal rule for integration.
- vii) State Regula Falsi method formula to find the root of the equation  $f(x) = 0$  in the interval  $(x_0, x_1)$ .

3. A) Attempt **any two** from the following : **10**

- i) Solve the following system by using Gauss Jordan elimination method.

$$x + y + 2z = 7, \quad -x - 2y + 3z = 6; \quad 3x - 7y + 6z = 1.$$

- ii) Show that  $\Delta \left[ \frac{f(x)}{g(x)} \right] = \frac{g(x) \Delta f(x) - f(x) \Delta g(x)}{g(x+h) \cdot g(x)}$ .

- iii) Find the real root of the equation  $x^3 - 2x - 5 = 0$  correct upto 4-decimal places by using Newton-Raphson method.

B) Attempt **any one** from the following : **10**

- i) Write the general quadrature formula and hence state and derive Simpson's  $(1/3)^{rd}$  rule.
- ii) Write the Newton's forward difference interpolation formula from the following data estimate  $f(24)$

|            |         |         |         |         |         |
|------------|---------|---------|---------|---------|---------|
| x          | 21      | 25      | 29      | 33      | 37      |
| $y = f(x)$ | 18.4708 | 17.8144 | 17.1070 | 16.3432 | 15.5154 |







2. Attempt **any five** of the followings :

10

- i) Define – Discrete variable.
- ii) State any two objectives of classification.
- iii) Define – Relative frequency.
- iv) Given –  $n = 10$ ,  $\sum(X - \bar{X})^2 = 400$ ,  $\sum X = 55$ . Find C.V.
- v) Given –  $n = 20$ ,  $\sum(X - 8) = 150$ . Find  $\bar{X}$ .
- vi) Given –  $\mu_2 = 7$ ,  $\mu_3 = -49$ , comment on skewness of frequency distribution.
- vii) The sum and difference of upper and lower quartiles are 50 and 30 respectively. Find coefficient of Q.D.

3. A) Attempt **any two** of the following :

10

- 1) Define – Median. Explain step-by-step how median is obtained in case of continuous frequency distribution.
- 2) Explain stratified sampling method.
- 3) The A.M. and S.D. of 10 values are 50 and 10 respectively. Later on it is noticed that one of the values 68 was wrongly taken as 58. Find correct A.M. and S.D.

B) Attempt **any one** of the following :

10

- 1) Define – S.D., C.V. state merits and demerits of S.D. State formula for combined S.D.
- 2) Draw less than ogive to represents the following data and hence obtain first and third quartiles :

| Weight in kg. | No. of Workers |
|---------------|----------------|
| 40 – 45       | 7              |
| 45 – 50       | 17             |
| 50 – 55       | 22             |
| 55 – 60       | 33             |
| 60 – 65       | 28             |
| 65 – 70       | 18             |
| 70 – 75       | 4              |



SECTION – II  
(Probability Theory – I)

1. Select most correct answer : 5

i) If you have to make a choice of 7 questions out of 10 questions set, then you can do it in \_\_\_\_\_ number of ways.

- a)  $3! \times {}^{10}C_7$       b)  $7! \times {}^{10}C_7$       c)  ${}^{10}P_7$       d)  $\frac{{}^{10}P_7}{7!}$

ii) Number of ways by which 2 persons out of 5 are selected so that one particular person is always excluded is

- a)  ${}^4C_2$       b)  ${}^5C_2$       c)  ${}^4P_2$       d)  ${}^5P_2$

iii) If A and B are two events which have no point in common, the events A and B are

- a) complementary to each other      b) independent  
c) mutually exclusive      d) dependent

iv) If  $E(X^2) = 1$  and  $E(X) = 1$  then  $V(-X) =$  \_\_\_\_\_

- a) -1      b) 0      c) 1      d) 2

v) A family of a parametric distribution in which mean is equal to variance is

- a) Binomial distribution      b) Hypergeometric distribution  
c) Uniform distribution      d) Poisson distribution

2. Answer **any five** of the following : 10

- i) Define Permutation and Combination.
- ii) Give mathematical definition of probability.
- iii) State additive property of Binomial distribution.
- iv) Define discrete uniform distribution.
- v) If  ${}^5P_r = 60$ , find r.
- vi) If  $P(A) = 0.59$ ,  $P(B) = 0.3$ ,  $P(A \cap B) = 0.21$  then find  $P(\bar{A} \cap B)$  and  $P(A \cap \bar{B})$ .
- vii) In how many ways 2-digit numbers can be formed using the digits 1, 3, 5, 7, 9 if repetition is not allowed ?



3. A) Answer **any two** of the following : **10**
- i) Define hypergeometric distribution. State its mean and variance.  
If  $X \sim h(N = 15, M = 8, n = 5)$ , find  $P(X < 1)$ .
  - ii) Define c.d.f. and state its properties.
  - iii) An unbiased coin is tossed 3 times. Let A, B and C are the events that head occurs at 1<sup>st</sup>, 2<sup>nd</sup> and 3<sup>rd</sup> toss respectively. Discuss the independence of the events A, B and C.
- B) Answer **any one** of the following : **10**
- i) Give axiomatic definition of probability. State and prove addition law of probability.
  - ii) A box contains 8 white balls and 6 black balls. Two balls are drawn at random one by one without replacement. Find the probability of drawing
    - a) both white balls
    - b) first white and second black balls.
-



|          |  |
|----------|--|
| Seat No. |  |
|----------|--|

**B.Sc. (ECS) I (Semester – II) (CGPA Pattern) Examination, 2015**  
**COMPUTER SCIENCE (Paper – II)**  
**Computer Fundamentals and Programming Using C – II**

Day and Date : Friday, 6-11-2015  
Time : 10.30 a.m. to 1.00 p.m.

Max. Marks : 70

- N.B :** 1) **All questions are compulsory.**  
2) **Figures to the right indicate full marks.**  
3) **Answer of two Sections should be written in separate answer sheet.**

SECTION – I  
**(Computer Fundamentals)**

1. Choose correct alternatives : 5
- 1) Default extension of word file is
    - a) .bmp                      b) .jpg                      c) .cpp                      d) none of these
  - 2) \_\_\_\_\_ tag used in HTML to insert the image on web page.
    - a) <picture>              b) <img>                      c) <td>                      d) <H>
  - 3) Data transmission in which data flows both the direction simultaneously called as
    - a) full duplex              b) half duplex              c) simplex                      d) all of above
  - 4) When one node fails, whole network is fail is
    - a) ring topology              b) bus topology              c) star topology              d) none of these
  - 5) Mesh topology central controller is used to connect nodes.
    - a) True                      b) False
2. Attempt **any five** of the following. 10
- 1) Define operating system.
  - 2) State any four html tags.
  - 3) List the aggregate function used in excel.



- 4) State data types in javascript.
  - 5) Define multitasking.
  - 6) Define star topology.
3. A) Attempt **any two** of the following. 10
- 1) How to insert the table in word ? Explain it.
  - 2) Explain with the help of diagram the concept of 'Multiprogramming'.
  - 3) Explain built in function used in java script.
- B) Attempt **any one** of the following : 10
- 1) Explain the functions of operating system.
  - 2) Explain any two tag in HTML with the help of example.

SECTION – II  
(Programming Using C – II)

1. Choose correct alternatives. 5
- 1) Main () function is user defined function  
a) True                      b) False
  - 2) \_\_\_\_\_ is the variable to store the memory address of another variable.  
a) Pointer                      b) Function                      c) Structure                      d) Union
  - 3) \_\_\_\_\_ function used in C to read the character from a file.  
a) Fgetc ()                      b) read ()                      c) write ()                      d) FeoF()
  - 4) \_\_\_\_\_ is the collection of same of different data type of element.  
a) Function                      b) Array                      c) Structure                      d) None of these
  - 5) \_\_\_\_\_ is the symbol to accessing the element of structure to main program.  
a) \*                      b) ▪                      c) &                      d) ?
2. Attempt **any five** from the following : 10
- 1) Define function. State the types of function.
  - 2) What is meant by actual argument ?



- 3) Write the syntax of pointer declaration.
- 4) Write the syntax of union.
- 5) Define file.
- 6) Write the syntax of 'Fopen()' function.

3. A) Solve **any two** of the following : **10**

- 1) Define recursion. Explain with the help of example.
- 2) Explain 'pointer arithmetic'.
- 3) Write a program in C to display the student information by using structure.

B) Solve **any one** of the following : **10**

- 1) Write a program in C to read a file and to count the number of characters, blank spaces, and number of lines in that file.
  - 2) Differentiate the structure and union with the help of example.
-





|             |  |
|-------------|--|
| Seat<br>No. |  |
|-------------|--|

**B.Sc. (E.C.S.) – I (Semester – II) (CGPA Pattern) Examination, 2015  
LINEAR AND DIGITAL ELECTRONICS – II (Paper – III)**

Day and Date : Saturday, 7-11-2015  
Time : 10.30 a.m. to 1.00 p.m.

Max. Marks : 70

- N.B. :** 1) **All** questions are **compulsory**.  
2) Figures to the **right** place indicate **full** marks.  
3) Answer of **two Sections** should be written in **separate** answer sheet.

SECTION – I  
(Linear)

1. Choose correct alternatives :

5

- 1) In Hartely oscillator the feedback network consist of \_\_\_\_\_ tank circuit.  
a) LC  
b) RC  
c) LR  
d) None of these
- 2) The FET has \_\_\_\_\_ power gain.  
a) low  
b) high  
c) poor  
d) none of these
- 3) The I/P impedance of Op Amp is \_\_\_\_\_  
a) low  
b) high  
c) poor  
d) none of these
- 4) The bistable multivibrator has \_\_\_\_\_ stable states.  
a) 2  
b) 3  
c) 4  
d) 1
- 5) The frequency response cure for RC amplifier is \_\_\_\_\_  
a) low  
b) good  
c) poor  
d) none of these





2. Answer **any five** of the followings : 10
- 1) Give the parameters of ideal Op Amp.
  - 2) Explain parameters of JFET.
  - 3) Explain DC amplifier.
  - 4) Draw the circuit symbol for enhancement and Depletion MOSFET.
  - 5) Explain the crystal oscillator.
  - 6) Explain virtual ground concept.
  - 7) Give the difference between JFET and MOSFET.
3. A) Attempt **any two** of the followings : 10
- 1) Explain construction and working of N channel JFET.
  - 2) Explain Op Amp as a adder and subtractor.
  - 3) Explain frequency response curve of CE amplifier.
- B) Attempt **any one** of the followings : 10
- 1) Define amplifier. Explain different types of amplifier according to mode of operation.
  - 2) Define MVT. Explain AMVT and MMVT by using IC 555.

SECTION – II  
(Digital Electronics – II)

1. Choose correct alternatives : 5
- 1) ROM is a \_\_\_\_\_ memory.
    - a) Volatile
    - b) Non-volatile
    - c) Temporary
    - d) None of these
  - 2) In R – 2R ladder network \_\_\_\_\_ values registers are used.
    - a) 0
    - b) 1
    - c) 2
    - d) 3
  - 3) For 2 bit flash ADC \_\_\_\_\_ comparators are used.
    - a) 4
    - b) 1
    - c) 2
    - d) 3
  - 4) In T flip flop both J and K are \_\_\_\_\_.
    - a) Low
    - b) High
    - c) Zero
    - d) None of these
  - 5) IC 7490 is a \_\_\_\_\_ pin IC.
    - a) 14
    - b) 16
    - c) 20
    - d) 24



2. Answer **any five** of the followings : **10**
- 1) Explain working of D Flip flop.
  - 2) Give applications of ADC.
  - 3) Explain static RAM.
  - 4) Explain mod 5 counter.
  - 5) Draw diagram of MSJK flip flop.
  - 6) Explain parameters of DAC.
  - 7) Explain parameters of memory.
3. A) Attempt **any two** of the followings : **10**
- 1) Explain R – 2R ladder network.
  - 2) Explain RS flip flop by using NOR gate.
  - 3) Write a note on diode matrix ROM.
- B) Attempt **any one** of the followings : **10**
- 1) Define DAC. Explain counter and SAR type DAC.
  - 2) What is Shift register ? Explain any two types of 3 bit shift register.
-



|             |  |
|-------------|--|
| Seat<br>No. |  |
|-------------|--|

**B.Sc. (ECS) – I (Semester – II) Examination, 2015**  
**(CGPA Pattern)**  
**MATHEMATICS (Paper – IV)**  
**Algebra and Operations Research**

Day and Date : Monday, 16-11-2015  
Time : 10.30 a.m. to 1.00 p.m.

Max. Marks : 70

- N.B. :** 1) Write answers of Section I and Section II on **separate** answer books.  
2) **All** questions are **compulsory**.  
3) Use of scientific calculator is **allowed**.  
4) Figures to the **right** indicate **full** marks.  
5) To draw the graphs (if necessary) the graph paper will be **provided** on request.

SECTION – I  
**(Algebra)**

1. Choose the correct alternative :

5

- 1) The conditional statement  $\sim q \rightarrow \sim p$  is called as \_\_\_\_\_ form of the statement  $p \rightarrow q$ .
- a) converse  
b) inverse  
c) contrapositive  
d) special
- 2) If  $a * b = b * a = e$ , where 'e' is the identity element w.r.t. binary operation \* then 'b' is called as
- a) identity element  
b) inverse of a  
c) inverse of b  
d) binary element
- 3) If every element of set A is related to unique element of set B then such a relation is called as \_\_\_\_\_ from A to B.
- a) function  
b) void relation  
c) co-domain  
d) universal relation





SECTION – II  
(Operations Research)

1. Choose the correct alternative : 5

- 1) In the Canonical form of LPP, the objective function is of \_\_\_\_\_ type.
  - a) maximise
  - b) minimise
  - c) stabilize
  - d) either maximise or minimise
- 2) Graphical method of solving LPP can be used only when the number of decision variables are
  - a) 1
  - b) more than 2
  - c) 2
  - d) any positive integer
- 3) If in a T.P. the number of occupied cells are equal to  $m + n - 1$  then the solution under test is \_\_\_\_\_ solution.
  - a) degenerate
  - b) non-degenerate
  - c) optimum
  - d) IBFS
- 4) The opportunity cost i.e.  $d_{ij}$  value for occupied cell is
  - a)  $\in$
  - b) 0
  - c) negative
  - d) any positive value
- 5) Hungarian method is used to solve
  - a) LPP
  - b) T.P.
  - c) A.P.
  - d) Dual LPP

2. Attempt **any five** of the following : 10

- 1) Define slack variable.
- 2) Define unbalanced T.P.
- 3) Define balanced A.P.
- 4) What is objective of solving A.P. and T.P. ?
- 5) Write dual of the following LPP  
Minimise  $z = 3x + 2y$   
Subject to  $4x + 5y \geq 4$ ;  $3x + 4y \geq 5$ ;  $5x + 6y \geq 7$ ;  $x, y \geq 0$ .
- 6) Define decision variables in LPP.
- 7) Write the names of the methods to find IBFS of a T.P.



3. A) Attempt **any two** of the following :

10

- 1) Write a brief note on degeneracy in T.P.
- 2) Solve the following A.P. to minimise the assignment cost.

|   | I  | II | III | IV |
|---|----|----|-----|----|
| A | 40 | 50 | 60  | 65 |
| B | 30 | 38 | 46  | 48 |
| C | 25 | 33 | 41  | 43 |
| D | 39 | 45 | 51  | 59 |

3) Solve the following LPP by using simplex method

$$\text{Maximise } z = 10x + y + 2z$$

$$\text{Subject to } x + y - 2z \leq 10; 4x + y + z \leq 20;$$

$$x, y, z \geq 0.$$

B) Attempt **any one** of the following :

10

- 1) Find IBFS of the following T.P. by using
  - i) North-West corner method.
  - ii) Vogel's Approximation method.

|                | W <sub>1</sub> | W <sub>2</sub> | W <sub>3</sub> | a <sub>i</sub> |
|----------------|----------------|----------------|----------------|----------------|
| F <sub>1</sub> | 8              | 8              | 15             | 120            |
| F <sub>2</sub> | 15             | 10             | 17             | 80             |
| F <sub>3</sub> | 3              | 9              | 10             | 80             |
| b <sub>j</sub> | 150            | 80             | 50             |                |

2) Solve the following A.P. to maximise the total profit.

|   | P  | Q  | R  | S  | T  |
|---|----|----|----|----|----|
| A | 28 | 48 | 42 | 36 | 38 |
| B | 48 | 38 | 40 | 20 | 15 |
| C | 25 | 36 | 14 | 12 | 8  |
| D | 8  | 4  | 12 | 10 | 12 |
| E | 5  | 6  | 12 | 18 | 16 |



|             |  |
|-------------|--|
| Seat<br>No. |  |
|-------------|--|

**B.Sc. (ECS) (Part – I) (Semester – II) (CGPA Pattern) Examination, 2015**  
**STATISTICS (Paper – V)**  
**Descriptive Statistics and Probability Theory – II**

Day and Date : Tuesday, 17-11-2015

Max. Marks : 70

Time : 10.30 a.m. to 1.00 p.m.

- N.B. :** i) **Use separate answer book for Section I and Section II.**  
ii) **Figures to the right indicate full marks.**  
iii) **Use of any type of calculator is allowed.**

**SECTION – I**  
**(Descriptive Statistics)**

1. Select most correct alternative.

5

- i) The correlation between X and Y is said to be perfect if
- X and Y changes in same direction
  - X and Y changes in opposite direction
  - X and Y changes in proportion
  - None of these
- ii) If  $\text{cov}(x, y) = 25$ ,  $\sigma_x^2 = 49$ ,  $\sigma_y^2 = 64$ , then by  $x =$
- a)  $\frac{25}{49}$       b)  $\frac{25}{64}$       c)  $\frac{5}{7}$       d)  $\frac{5}{8}$
- iii) The correlation between a variable and its estimated value given by plane of regression is called
- total correlation
  - partial correlation
  - multiple correlation
  - none of these
- iv) During \_\_\_\_\_ phase of cyclical variation economic activities shows rising trend.
- prosperity
  - recession
  - depression
  - recovery

P.T.O.



v) \_\_\_\_\_ price I. No. uses both quantities in base period and current period as a weights.

- a) Fisher's                      b) Laspeyre's                      c) Paasche's                      d) All of these

2. Attempt **any five** of the following :

10

- i) Define correlation.
- ii) Define index number.
- iii) State normal equations to obtain constants of second degree curve.
- iv) Given :  $\sum(x - \bar{x})(y - \bar{y}) = -43$ ,  $\sum(x - \bar{x})^2 = 73$ ,  $\sum(y - \bar{y})^2 = 81$ . Find  $r_{xy}$ .
- v) If  $r_{12} = r_{13} = r_{23} = 0.6$  find  $R_{1.23}$ .
- vi) The regression equations are  $x + 2y = 24$  and  $-2x - 3y = -42$ . Find  $\bar{x}$ ,  $\bar{y}$ .
- vii) Given :  $\sum P_1 = 150$ ,  $\sum P_0 = 95$ . Find price index number.

3. A) Attempt **any two** of the following :

10

- i) Write short note on multiple correlation.
- ii) Explain seasonal variations.
- iii) Find Spearman's Rank correlation coefficient between x and y.

|            |    |    |    |    |    |    |
|------------|----|----|----|----|----|----|
| <b>x :</b> | 50 | 54 | 47 | 63 | 58 | 72 |
| <b>y :</b> | 58 | 56 | 63 | 54 | 52 | 38 |

B) Attempt **any one** of the following :

10

- i) Define regression coefficients. State properties of regression coefficients.
- ii) Find Laspeyre's, Paasche's and Fisher's price and quantity I.No's. for the year 2010.

| Commodity | Year 2009 |      | Year 2010 |      |
|-----------|-----------|------|-----------|------|
|           | Price     | Qty. | Price     | Qty. |
| <b>A</b>  | 15        | 5    | 20        | 4.5  |
| <b>B</b>  | 70        | 2.5  | 85        | 3    |
| <b>C</b>  | 45        | 1.5  | 40        | 2    |





SECTION – II  
(Probability Theory – II)

1. Select most correct alternative. 5

i) If pmf of r.v.  $x$  is  $f(x) = Kx(2 - x)$  if  $0 \leq x < 2$  then value of  $K$  is

- a)  $\frac{3}{4}$                       b) 1                      c)  $\frac{1}{4}$                       d)  $\frac{4}{3}$

ii) If  $X$  follows normal distribution with mean 60 and variance is 10. Then maximum height of its probability density curve is

- a) 60                      b) 50                      c) 65                      d) 70

iii) Testing  $H_0 : \mu = \mu_0$  against  $H_1 : \mu \neq \mu_0$  is

- a) one sided left tailed test                      b) one sided right tailed test  
c) two sided test                      d) none of these

iv) Let  $X \rightarrow U(4, 16)$ . Then variance of r.v.  $x$  is

- a) 16                      b) 4                      c) 20                      d) 12

v) A statistical measure based on all units of population is called

- a) statistic                      b) parameter                      c) sample                      d) none of these

2. Answer **any five** : 10

i) Define type – I and type – II errors.

ii) Suppose r.v.  $x$  has uniform distribution over  $(2, 10)$ . Calculate  $p(2 \leq x \leq 8)$ .

iii) Define cumulative distribution function of an exponential distribution with mean  $\theta$ .

iv) Joint pmf of  $(x, y)$  is

$$p(x, y) = \frac{2x + 3y}{71}; \begin{matrix} x = 0, 1, 2 \\ y = 1, 2, 3 \end{matrix}. \text{ Find marginal pmf of r.v. } x.$$

v) A continuous r.v.  $x$  has pdf  $f(x) = \begin{cases} \frac{x^2}{3} & \text{if } -1 \leq x \leq 2 \\ 0 & \text{if o.w.} \end{cases}$

calculate  $p(-\frac{1}{2} \leq x \leq \frac{1}{2})$ .



- vi) Define null hypothesis and alternative hypothesis.
- vii) Let X be a continuous r.v. with pdf f(X). Then mean of X is

a)  $\int_0^{\infty} Xf(X)dX$

b)  $\int_{-\infty}^{\infty} Xf(X)dX$

c)  $\int_{-\infty}^{\infty} f(X)dX$

d) None of these

3. A) Attempt **any two** :

10

- i) Define exponential distribution. State mean, variance and cumulative distribution function of it.
- ii) Define cumulative distribution function of a continuous r.v. x. State any four properties of it.
- iii) A coin is tossed 400 times and it turned up head 210 times. Test whether the coin is an unbiased.

B) Answer **any one** :

10

- i) Write test procedure for testing equality of two population means.
- ii) The joint pmf of (x , y) is,

|          |          |          |          |
|----------|----------|----------|----------|
| <b>x</b> | <b>1</b> | <b>2</b> | <b>3</b> |
| <b>y</b> |          |          |          |
| <b>2</b> | 3/24     | 1/24     | 2/24     |
| <b>4</b> | 6/24     | 6/24     | 0        |
| <b>6</b> | 3/24     | 1/24     | 2/24     |

Calculate

- i) E (x)
- ii) E (y)
- iii) p (x = 3/y = 6)
- iv) Marginal pmf of x
- v) Marginal pmf of y.

---



|          |  |
|----------|--|
| Seat No. |  |
|----------|--|

**B.Sc. (ECS) – II (Semester – III) Examination, 2015  
(New CGPA Pattern)  
Paper – I : OPERATING SYSTEM**

Day and Date : Thursday, 19-11-2015  
Time : 2.30 p.m. to 5.00 p.m.

Max. Marks : 70

**Instructions:** 1) *All questions are compulsory.*  
2) *Figures to the right indicate full marks.*

1. Choose the correct alternative :

14

- 1) Cluster computer share \_\_\_\_\_
  - a) hardware
  - b) resources
  - c) storage
  - d) all
- 2) The CPU can only execute program which are stored in \_\_\_\_\_
  - a) hard disk
  - b) ROM
  - c) main memory
  - d) PROM
- 3) OS should perform job scheduling to have max utilization of the \_\_\_\_\_
  - a) resources
  - b) CPU
  - c) users
  - d) all
- 4) A process execution begins and ends with \_\_\_\_\_
  - a) I/O burst
  - b) CPU burst
  - c) quantum
  - d) all
- 5) To round robin algorithm is designed for \_\_\_\_\_ systems.
  - a) stand alone
  - b) binary
  - c) timesharing
  - d) online
- 6) The major problem with priority scheduling is \_\_\_\_\_
  - a) size of jobs
  - b) time required
  - c) definite blocking
  - d) starvation



- 7) Throughput is number of jobs \_\_\_\_\_
- a) executed simultaneously
  - b) in a ready queue
  - c) completed in unit time
  - d) a) and b)
- 8) A semaphore is to deal with \_\_\_\_\_ problem.
- a) mutual exclusion
  - b) indefinite waiting
  - c) bounded buffer
  - d) setting quantum
- 9) \_\_\_\_\_ examine an interrupt and determine how to handle it.
- a) IST
  - b) ISR
  - c) IRQ
  - d) OAL
- 10) A parent process is terminating then all its children must also terminated is called \_\_\_\_\_
- a) exit system call
  - b) cascading termination
  - c) interruption
  - d) all
- 11) \_\_\_\_\_ is shared between all threads in a process.
- a) local variable
  - b) scheduler priority
  - c) file descriptor
  - d) register values
- 12) \_\_\_\_\_ algorithm is used for scheduling.
- a) FIFO
  - b) LIFO
  - c) Bakery
  - d) All
- 13) Windows 2000 schedules threads using priority based \_\_\_\_\_ scheduling algorithm.
- a) preemptive
  - b) non preemptive
  - c) queuing
  - d) time sharing
- 14) \_\_\_\_\_ problems is an example of concurrency control problem.
- a) Synchronization
  - b) Interrupt
  - c) Critical section
  - d) Scheduling

2. Answer (any 7) :

14

- 1) List various functions of operating system.
- 2) List various categories of system programs.
- 3) What is thread ?
- 4) What is Context Switch ?



- 5) What is Program Execution ?
- 6) What is Binary Semaphore ?
- 7) What is virtual machine ? Where it is used ?
- 8) What is deadlock and starvation ?

3. A) Answer (**any 2**) : **8**
- 1) Explain process control block in detail.
  - 2) Explain multilevel schedules.
  - 3) Explain dining philosophers problem.
- B) Define process. Explain different states of process with the help of process state diagram. **6**
4. Answer (**any 2**) : **14**
- 1) Explain the different types of operating systems.
  - 2) What is interrupt ? Discuss various types of interrupts and how they are handled.
  - 3) What is critical section problem ? What is the solution for multiple processes ?
5. Answer (**any 2**) : **14**
- 1) Define OS. Discuss various elements of O.S. with example.
  - 2) Discuss system calls provided by operating system.
  - 3) What is CPU scheduler ? What are the different criteria used for evaluating algorithm ? Explain disadvantages of FCFS and SJF.
-



|             |  |
|-------------|--|
| Seat<br>No. |  |
|-------------|--|

**B.Sc. (ECS) – II (Semester – III) (New CGPA) Examination, 2015  
OBJECT ORIENTED PROGRAMMING USING C++ – I (Paper – II)**

Day and Date : Friday, 20-11-2015

Max. Marks : 70

Time : 2.30 p.m. to 5.00 p.m.

**Instructions :** 1) **All questions are compulsory.**  
2) Figures to the **right** indicate **full** marks.

1. Choose correct alternatives.

14

- 1) The region of source code over which the definition of a variable is visible is called \_\_\_\_\_ of variable.
  - a) scope
  - b) extent
  - c) both a and b
  - d) none of these
- 2) \_\_\_\_\_ process binds data and functions together.
  - a) Polymorphism
  - b) Data abstraction
  - c) Data encapsulation
  - d) Class
- 3) Friend function can be defined inside class body.
  - a) True
  - b) False
- 4) << is called
  - a) cout
  - b) extraction
  - c) insertion
  - d) cin
- 5) OOP follows \_\_\_\_\_ approach.
  - a) bottom up
  - b) top down
  - c) both a and b
  - d) none of these
- 6) \_\_\_\_\_ is a default parameter passing technique in C++.
  - a) Pass by pointer
  - b) Pass by value
  - c) Pass by address
  - d) Both a and b
- 7) Constructor cannot virtual whereas destructor are virtual.
  - a) True
  - b) False



- 8) If function dose not return any value then its return type is  
a) friend                      b) public                      c) null                      d) void
- 9) We can overload scope resolution operator (::) operator.  
a) True                      b) False
- 10) Static member functions can access only static data of class directly  
a) True                      b) False
- 11) A function cannot modify its argument that has been declared as  
a) public                                              b) private  
c) const.                                              d) none of above
- 12) Run time polymorphism is achieved by  
a) function overloading                      b) operator overloading  
c) virtual function and pointer                      d) both a and b
- 13) When \_\_\_\_\_ statement is executed within the loop, the control goes to the top of the loop.  
a) continue                      b) break                      c) static                      d) exit ()
- 14) Object oriented programming approach focus on  
a) function                                              b) data  
c) algorithm                                              d) both b and c

2. Answer **any seven** of the followings :

**14**

- 1) Define Manipulator. Write use and syntax of end 1 manipulator.
- 2) Write difference between value variable and reference variable.
- 3) How to use private member function of a class ?
- 4) Write syntax and use of 'sizeof' operator.
- 5) What is nesting of class ?
- 6) How data hiding is achieved in C++ ?
- 7) Explain data abstraction as OOP's concept.
- 8) Write some applications of C++ language.
- 9) What is dynamic constructor ?



3. A) Attempt **any two** of the followings : **10**
- 1) What is inline function ? How inline function is differ from normal function ?
  - 2) What is operator overloading ? Explain different ways to overload operator in C++.
  - 3) Write a program that demonstrates the constructor with default values argument.
- B) Write a program to demonstrate use of common friend function for multiple classes. **4**
4. Answer **any two** of the followings : **14**
- 1) What is destructor ? List out its characteristics and give one example.
  - 2) What is function ? Explain different component of function with example.
  - 3) Write a program to demonstrate the passing object to member function by pass by reference method.
5. Answer **any two** of the followings : **14**
- 1) Write a program to overload + (arithmetic Addition) operator by using friend function.
  - 2) Explain copy constructor with example.
  - 3) Explain features of object oriented programming.
-











3. A) Attempt **any two** : **10**
- 1) Write an algorithm for evaluation of postfix expression using stack.
  - 2) Explain the various operations on circular queue.
  - 3) Write a function to insert a node in between a doubly linked list.
- B) Explain the difference between stack and queue. **4**
4. Attempt **any two** : **14**
- 1) Write a menu driven program to implement stack using linked-list.
  - 2) Explain polynomial manipulation as application of linked list.
  - 3) Write a program to implement linear queue using array.
5. Attempt **any two** : **14**
- 1) What is structure ? Explain pointer to structure with example.
  - 2) Write a program to display reverse string using stack.
  - 3) Write a menu driven program to implement singly linked list with the operations – create, insert at beginning, delete, display.
-



|             |  |
|-------------|--|
| Seat<br>No. |  |
|-------------|--|

**B.Sc. (ECS) – II (Semester – III) (New CGPA) Examination, 2015  
SOFTWARE ENGINEERING – I (Paper – IV)**

Day and Date : Monday, 23-11-2015  
Time : 2.30 p.m. to 5.00 p.m.

Max. Marks : 70

**Note :** 1) *All questions are compulsory.*  
2) *Figures to the right indicate full marks.*

1. Choose the correct alternative

14

- 1) The spiral model has two dimensions namely \_\_\_\_\_ and \_\_\_\_\_.
  - a) diagonal, angular
  - b) radial, perpendicular
  - c) radial, angular
  - d) diagonal, perpendicular
- 2) \_\_\_\_\_ includes review of the existing procedures and information flow.
  - a) Feasibility study
  - b) Feasibility report
  - c) System design
  - d) System analysis
- 3) \_\_\_\_\_ is a tabular method for describing the logic of the decisions to be taken.
  - a) Decision Table
  - b) Decision tree
  - c) Decision Data
  - d) Decision Method
- 4) A linear sequential software development model is also referred to as
  - a) Prototype Model
  - b) RAD Model
  - c) Spiral Model
  - d) None of these
- 5) Design phase will usually be
  - a) top-down
  - b) bottom-up
  - c) random
  - d) centre fingering
- 6) Detailed study of existing system is referred to as
  - a) System planning
  - b) Design DFD
  - c) Feasibility study
  - d) System analysis



- 7) During software development which factor is most crucial ?  
a) People                      b) Process                      c) Product                      d) Project
- 8) The model remains operative until the software is retired  
a) Waterfall                      b) Spiral                      c) Incremental                      d) None of these
- 9) The user system requirements are the parts of which document ?  
a) SDD                      b) SRS                      c) DDD                      d) All of these
- 10) Software engineering aims at developing  
a) Reliable Software  
b) Cost Effective Software  
c) Reliable and Cost effective Software  
d) None of above
- 11) Cost-Benefit Analysis is performed during \_\_\_\_\_ phase.  
a) Analysis                      b) Design  
c) Feasibility study                      d) Implementation
- 12) Which one of the following is not a form of Decision Table ?  
a) Limited-Entry                      b) Extended-Entry  
c) Mixed-Entry                      d) Double-Entry
- 13) Which type of system development life cycle is based on iterative structure of system development ?  
a) Waterfall model                      b) Prototype model  
c) Object-oriented model                      d) Dynamic systems development model
- 14) The efforts are taken to locate and fix an error in a software product is called as  
a) Reusability                      b) Portability  
c) Reliability                      d) Maintainability

2. Answer the following (**any 7**) :

14

- 1) Differentiate between open and closed system.
- 2) What is main objective of a system analyst ?
- 3) How can you measure the performance of a software system ?
- 4) What is requirement engineering process ?



- 5) How system analyst keeps the relation between company and computer system ?
  - 6) Identify six stages of system development life cycle.
  - 7) Which are the various principles of flowcharting ?
  - 8) What are the benefits of software prototyping ?
  - 9) What is requirement anticipation ?
3. A) Answer the following (**any 2**) : **10**
- 1) State the advantages and disadvantages of HIPO.
  - 2) Which are the various software characteristics ?
  - 3) Which are the general activities in the requirement analysis ?
- B) What is a decision table ? State the merits and demerits of decision tables. **4**
4. Answer the following (**any 2**) : **14**
- 1) Discuss the role of system analyst in designing and implementing information system.
  - 2) Explain in detail software qualities of software.
  - 3) What is SRS ? What are the things that can be included in an SRS ?
5. Answer the following (**any 2**) : **14**
- 1) The spiral model is a realistic approach to the development of large scale system and software - elaborate.
  - 2) Explain various activities involved in system design.
  - 3) What are the main components of HIPO chart ?
-









- 9) The PC-XT is basically \_\_\_\_\_ systems.
- a) Multiprogramming                      b) Multitasking  
c) Uniprogramming                         d) None of these
- 10) The instruction fetched from memory is transfer to \_\_\_\_\_
- a) CU                                              b) ALU  
c) CPU                                             d) IR
- 11) In \_\_\_\_\_ data transfer mode the CPU is not engaged.
- a) DMA                                            b) Programmed I/O  
c) Interrupt driven I/O                      d) None of these
- 12) PCI stands for \_\_\_\_\_
- a) Personal Computer Interconnect  
b) Peripheral Component Interface  
c) Peripheral Computer Interface  
d) Peripheral Component Interconnect
- 13) The 8088 is invented in \_\_\_\_\_
- a) 1982                                            b) 1981  
c) 1983                                            d) 1984
- 14) The physical memory of 80286 is \_\_\_\_\_
- a) 16 MB                                           b) 61 MB  
c) 16 GB                                           d) 16 KB

2. Answer **any seven** of the following :

14

- 1) Draw the Diagram of floppy disk drive.
- 2) Write the steps of booting process.
- 3) What is function of address bus, data bus and control bus ?
- 4) What is analog and digital signals ?
- 5) Give the difference between CD and DVD.
- 6) Explain the OG interrupts.
- 7) Differentiate between TTL and composite video interface.
- 8) Draw the diagram of ALU.
- 9) Define impact and non impact printer.



3. A) Answer **any two** of the following : **10**
- 1) Explain the working of laser printer.
  - 2) What is interrupt ? Explain different types of interrupt.
  - 3) Explain the PC hardware in old generation.
- B) Answer the following : **4**
- 1) Explain how recording of data is done on magnetic disk ?
4. Answer **any two** of the following : **14**
- 1) Explain the block diagram Keyboard and keyswitches in detail.
  - 2) Write a short note on cache memory and explain the memory hierarchy in detail.
  - 3) What is the need of the DMA ? Write a note on cycle stealing concept.
5. Answer **any two** of the following : **14**
- 1) Explain the any two I/O techniques with neat diagram.
  - 2) What is virtual memory ? Explain virtual memory mechanism in detail.
  - 3) What are OG and NG ? Explain NG interrupts in detail.
-





- 8) To design the 512 byte ROM how much address lines are required ?  
a) 10                      b) 16                      c) 9                      d) 20
- 9) In asynchronous communication interface \_\_\_\_\_ register indicate transfer register is empty or full.  
a) Status                  b) Control                  c) Receiver                  d) Transmitter
- 10) In general register organization destination is selected by using  
a) MUX                      b) DECODER                  c) ALU                      d) DE-MUX
- 11) \_\_\_\_\_ memory is internal memory.  
a) Primary                  b) CPU register                  c) Cache                      d) Secondary
- 12) Which one of the following is IOP ?  
a) 8086                      b) 8089                      c) 8085                      d) 8255
- 13) Mean time before failure is related to  
a) Reliability                  b) Access time                  c) Cost                      d) Capacity
- 14) In asynchronous communication \_\_\_\_\_ start bits are transmitted.  
a) 3                          b) 2                          c) 1                          d) 4

2. Solve **any seven** of the following :

**14**

- 1) What is stack ?
- 2) Explain cost and capacity characteristics of memory.
- 3) State polling priority interrupt.
- 4) Explain instruction format.
- 5) Explain data transfer instruction.
  - i) MOV
  - ii) IN and OUT.
- 6) What is memory hierarchy ?
- 7) Draw the block diagram of DMA transfer.
- 8) What is isolate I/O ?
- 9) Explain immediate addressing mode.



3. A) Attempt **any two** of the following. **10**
- 1) Explain RAM with its signals.
  - 2) Explain input output interface.
  - 3) What is optical memory ? Explain it.
- B) What is segmentation ? **4**
4. Attempt **any two** of the following. **14**
- 1) Explain memory connection with CPU.
  - 2) Write a note on bit slice processor.
  - 3) Explain asynchronous data transfer with strobe mode.
5. Attempt **any two** of the following. **14**
- 1) Write a note on combinational and sequential ALU.
  - 2) Explain logical and bit manipulation instruction.
  - 3) Explain in detail DMA controller.
-





|             |  |
|-------------|--|
| Seat<br>No. |  |
|-------------|--|

**B.Sc. (ECS – II) (Semester – III) Examination, 2015  
OPERATING SYSTEM – I (Paper – I) (Old)**

Day and Date : Thursday, 19-11-2015  
Time : 2.30 p.m. to 4.30 p.m.

Max. Marks : 50

**Instructions:** 1) Figures to the **right** indicate **full** marks.  
2) **All** questions are **compulsory**.

1. Multiple choice questions :

10

- 1) FIFO scheduling is \_\_\_\_\_
  - a) Preemptive scheduling
  - b) Non-preemptive scheduling
  - c) Deadlock scheduling
  - d) None of these
- 2) \_\_\_\_\_ is the solution to critical section problem.
  - a) Mutual exclusion
  - b) Race condition
  - c) System calls
  - d) None of these
- 3) \_\_\_\_\_ is a program that acts as an intermediary between computer user and computer hardware.
  - a) Process management
  - b) Storage management
  - c) Operating system
  - d) All the above
- 4) \_\_\_\_\_ provides interface to services made available by operating system.
  - a) Programming execution
  - b) I/O operation
  - c) System calls
  - d) Accounting
- 5) The RR scheduling is designed specially for \_\_\_\_\_ system.
  - a) Time sharing
  - b) Distributed
  - c) Real time
  - d) Multiprogramming





- 6) A process can be defined as \_\_\_\_\_
- a) Any user program
  - b) Any program in execution
  - c) Real time
  - d) Multiprogramming
- 7) The dining philosophers problem is an example of \_\_\_\_\_
- a) Critical section
  - b) Memory management
  - c) Free space allocation
  - d) None of these
- 8) The short term scheduler selects \_\_\_\_\_
- a) The process which is ready to execute and allocate CPU
  - b) The jobs are admitted to the system for processing
  - c) The process loads them into memory
  - d) None of these
- 9) A major problem with priority scheduling algorithm is \_\_\_\_\_
- a) Saturation
  - b) Starvation
  - c) Deadlock
  - d) None of these
- 10) PCB means \_\_\_\_\_
- a) Program Control Block
  - b) Process Communication
  - c) Process Control Block
  - d) None of these

2. Answer **any five** of the following :

10

- 1) Define process and threads.
- 2) Define throughput and turn around time.
- 3) Define system calls.
- 4) What is operating system ? Explain components of operating system.
- 5) Explain time sharing operating system.
- 6) Explain ready queues.

3. A) Answer **any two** of the following :

6

- 1) Explain design goals of operating system.
- 2) Explain structure of PCB.
- 3) Write a note on semaphores.



B) Consider the following 4 workloads, calculate the following using FCFS algorithm : 4

| Job            | Burst Time |
|----------------|------------|
| J <sub>1</sub> | 7          |
| J <sub>2</sub> | 5          |
| J <sub>3</sub> | 5          |
| J <sub>4</sub> | 10         |

- i) Prepare a Gantt chart for it.
- ii) Calculate average turn around time.
- iii) Calculate average waiting time.

4. Answer **any two** of the following : 10

- 1) What are the services provided by operating system ?
- 2) Write a note on process states with neat diagram.
- 3) Explain layered structure of operating system.

5. Answer **any two** of the following : 10

- 1) Explain reader-writer problem in detail.
  - 2) Explain critical section with an example.
  - 3) Explain multilevel queues and priority queues in detail.
-



|             |  |
|-------------|--|
| Seat<br>No. |  |
|-------------|--|

**B.Sc. (ECS) – II (Semester – III) Examination, 2015**  
**OBJECT ORIENTED PROGRAMMING USING C++ - I (Old) (Paper – II)**

Day and Date : Friday, 20-11-2015  
Time : 2.30 p.m. to 4.30 p.m.

Max. Marks : 50

**N. B. :** 1) **All questions are compulsory.**  
2) **Figures to the right indicate full marks.**

1. Choose correct alternatives : 10
- 1) \_\_\_\_\_ is insertion operator.  
a) <                      b) >                      c) >>                      d) <<
  - 2) The member function declared in private access specifier called as \_\_\_\_\_  
a) Friend function                      b) Private member function  
c) Inline member function                      d) None of these
  - 3) Constructor should be declared public section only.  
a) True                      b) False
  - 4) \_\_\_\_\_ operator can not be overloaded.  
a) +                      b) \*                      c) /                      d) @
  - 5) Return type of constructor is \_\_\_\_\_  
a) void                      b) int                      c) char                      d) none of these
  - 6) When unary operator overloads it take \_\_\_\_\_ argument.  
a) 1                      b) 0                      c) 2                      d) 3
  - 7) Wrapping up data and functions into single unit called as \_\_\_\_\_  
a) encapsulation                      b) data hiding  
c) inheritance                      d) none of these
  - 8) Constructor name and class name must not be same.  
a) True                      b) False







7. Which of the following data structures is not linear data structure ?
- a) Arrays
  - b) Linked lists
  - c) Both a and b
  - d) None of these
- 8) The operation of processing each element in the list is known as \_\_\_\_\_
- a) Inserting
  - b) Merging
  - c) Traversing
  - d) Sorting
- 9) One difference between a Stack and Queue is \_\_\_\_\_
- a) Queue require dynamic memory but stack do not
  - b) Stack require dynamic memory but queue do not
  - c) Queues use two ends of the structure while stacks use only one
  - d) Stacks use two ends of the structure while queues use only one
10. Algorithm is a solution to a problem independent of programming language.
- a) True
  - b) False

2. Answer the following (**any 5**).

**10**

- 1) What is multidimensional array ?
- 2) Give the difference between Push and Pop.
- 3) What is a postfix expression ?
- 4) Why use structures ?
- 5) Define Circular Queue.
- 6) Give the advantages of data structures.

3. A) Answer the following (**any 2**).

**6**

- 1) Differentiate Stack and Array.
- 2) What is singly linked list ? Give it's disadvantage.
- 3) Give the applications of queue.

B) Write note on priority queue.

**4**



4. Answer the following (**any 2**). **10**
- 1) Explain following operations of linear linked list.
    - a) Delete
    - b) Search.
  - 2) Write an algorithm for deletions of elements from a circular queue.
  - 3) Explain the steps to evaluate the postfix expression.
5. Answer the following (**any 2**). **10**
- 1) Write a program to implement stack dynamically.
  - 2) Explain the term
    - a) Divide and conquer
    - b) Greedy algorithm.
  - 3) What is ADT ? Explain ADT for queue.
-



|             |  |
|-------------|--|
| Seat<br>No. |  |
|-------------|--|

**B.Sc. (ECS) – II (Semester – III) (Old) Examination, 2015**  
**COMPUTER SCIENCE (Paper – IV)**  
**Software Engineering – I**

Day and Date : Monday, 23-11-2015  
Time : 2.30 p.m. to 4.30 p.m.

Total Marks : 50

**Instructions:** 1) **All questions are compulsory.**  
2) **Figures to the right indicate full marks.**

1. Choose the correct alternative : 10

- 1) HIPO is \_\_\_\_\_ tool.
  - a) design tool
  - b) development tool
  - c) documentation tool
  - d) all of these
- 2) \_\_\_\_\_ or conceptual system is an orderly arrangement of independent ideas.
  - a) Abstract
  - b) Physical
  - c) Both a) and b)
  - d) None of these
- 3) \_\_\_\_\_ is quality of software in which for incorrect input also performs well.
  - a) Reliability
  - b) Robustness
  - c) Correctness
  - d) None of these
- 4) \_\_\_\_\_ is an agreement between system developer and user.
  - a) Requirement specification
  - b) Requirement Investigation
  - c) Both a) and b)
  - d) None of these
- 5) Which of the following is not technique of fact finding method ?
  - a) Record review
  - b) Performance
  - c) Observation
  - d) Interview





- 6) Study of physical system contains
- a) What is purpose of activity ?
  - b) What output is expected ?
  - c) Which persons, departments are involved ?
  - d) All of these
- 7) A channel for communicating across boundary between 2 or more subsystems are known as \_\_\_\_\_
- a) Interface
  - b) Entity
  - c) Data path
  - d) All of these
- 8) Most artificial systems are man-machine system.
- a) True
  - b) False
- 9) Waterfall model is also called as linear sequential model.
- a) True
  - b) False
- 10) Structured charting tools are \_\_\_\_\_
- a) Structured flow charts
  - b) HIPO chart
  - c) Warnier-Orr diagrams
  - d) All of these

2. Answer **any five** of the following :

**10**

- 1) Write definition of system analysis.
- 2) What is need of Prototyping ?
- 3) State demerits of decision tables.
- 4) Write principles of flowchart.
- 5) Write advantages of interview.
- 6) What is Requirement Anticipation ?



3. A) Answer **any two** of the following : **6**
- 1) Write role of system analyst.
  - 2) Write note on system design.
  - 3) What is Questionnaire ? How to design a questionnaire ?
- B) What is program flowchart ? Explain with example. **4**
4. Answer **any two** of the following : **10**
- 1) Explain different types of interview.
  - 2) Explain Spiral model.
  - 3) What is Decision table ? Explain its types with example.
5. Answer **any two** of the following : **10**
- 1) Explain System Analysis phase in detail.
  - 2) Explain different qualities of a software.
  - 3) Explain elements of system.
-



|             |  |
|-------------|--|
| Seat<br>No. |  |
|-------------|--|

**B.Sc. (ECS) – II (Semester – III) (Old) Examination, 2015**  
**ELECTRONICS (Paper – V)**  
**Organization of PC – I**

Day and Date : Tuesday, 24-11-2015

Total Marks : 50

Time : 2.30 p.m. to 4.30 p.m.

**Instructions :** 1) **All questions are compulsory.**  
2) **Figures to the right place indicate full marks.**

1. Multiple Choice Questions :

10

- 1) The instruction fetched from memory is transfer to \_\_\_\_\_
  - a) Control Unit
  - b) ALU
  - c) Instruction Register
  - d) CPU
- 2) In DMA data transfer mode the \_\_\_\_\_ is incharge for data transfer.
  - a) CPU
  - b) ALU
  - c) DMA controller
  - d) None
- 3) CRC techniques allow detection of \_\_\_\_\_ bit failures.
  - a) Single
  - b) Double
  - c) Multiple
  - d) None
- 4) The PC-AT uses an advanced microprocessor such as \_\_\_\_\_ processor.
  - a) 8086
  - b) 8088
  - c) 8085
  - d) 80286
- 5) 8088 has 20 bit address bus and it can address upto \_\_\_\_\_ locations.
  - a) 1 MB
  - b) 2 MB
  - c) 64 KB
  - d) 32 KB
- 6) The PC-AT supports \_\_\_\_\_
  - a) multiprogramming
  - b) uniprogramming
  - c) flash memory
  - d) virtual
- 7) Usually the boot program is stored in \_\_\_\_\_
  - a) RAM
  - b) Hard disk
  - c) ROM
  - d) USB
- 8) The spindle motor is used to rotate the floppy diskette at \_\_\_\_\_
  - a) 225
  - b) 300
  - c) 350
  - d) 325



9) The DRAM memory are used in PC and these should be refreshed periodically.

- a) True                      b) False                      c) Both a and b      d) None

10) The cache memory is the buffer memory between main memory and \_\_\_\_\_

- a) CPU                      b) ALU                      c) CU                      d) None

2. Answer **any five** of the following : **10**

- 1) Define impact printer and non impact printer.
- 2) Write names of interrupt.
- 3) What is cold booting and warm booting ?
- 4) What is write-through policy and write-back policy ?
- 5) What is use of FM and MFM recording format ?
- 6) What is function of CPU ?

3. A) Answer **any two** of the following : **6**

- 1) Explain bus concept of CPU.
- 2) Explain block diagram of CPU.
- 3) Briefly explain Reset logic.

B) Draw diagram of different types of key switches with brief explanation. **4**

4. Attempt **any two** of the following : **10**

- 1) What is a interrupt ? Explain different types of interrupt.
- 2) Write a short note on cache memory.
- 3) Explain working of Laser printer.

5. Attempt **any two** of the following : **10**

- 1) Write a short note on CD-ROM operation.
  - 2) Explain concept of DMA.
  - 3) Write short note on latest motherboard.
-



|             |  |
|-------------|--|
| Seat<br>No. |  |
|-------------|--|

**B.Sc. (ECS) (Part – II) (Semester – III) Examination, 2015  
MICROPROCESSOR – I (Paper – VI) (Old)**

Day and Date : Thursday, 26-11-2015  
Time : 2.30 p.m. to 4.30 p.m.

Max. Marks : 50

- N.B. :** 1) **All questions are compulsory.**  
2) **Figures to the right indicate full marks.**  
3) **Neat diagrams must be drawn wherever necessary.**

1. Choose correct alternatives : 10

- 1) Push is \_\_\_\_\_ instruction.
  - a) Data transfer
  - b) Processor
  - c) Logical
  - d) Arithmetic
  
- 2) In memory mapped I/O control signals are \_\_\_\_\_
  - a) Common
  - b) Separate
  - c) Same
  - d) None of these
  
- 3) Dynamic memory uses \_\_\_\_\_ to store the information.
  - a) Capacitor
  - b) Flip flop
  - c) Particle
  - d) Pits and land
  
- 4) MOV R1, R2 is \_\_\_\_\_ address instruction.
  - a) Three
  - b) Two
  - c) One
  - d) Zero
  
- 5) To access 128 byte memory it requires \_\_\_\_\_ address lines.
  - a) 8
  - b) 7
  - c) 16
  - d) 20



- 6) Cache memory is used in \_\_\_\_\_ level hierarchy.  
a) 1                      b) 2                      c) 3                      d) 4
- 7) Intel 8089 IOP is \_\_\_\_\_ pin IC.  
a) 20                      b) 14                      c) 24                      d) 40
- 8) DPU is a part of \_\_\_\_\_  
a) ALU                      b) CPU  
c) IAC                      d) MMU
- 9) Daisy chaining is \_\_\_\_\_ used in priority scheme.  
a) Software                      b) Program  
c) Instruction                      d) Hardware
- 10) SP is used to point \_\_\_\_\_  
a) TOS                      b) BOS  
c) IC                      d) Memory

2. Attempt **any five** of the following :

**10**

- a) Explain volatile memory.
- b) What is mean by polling ?
- c) Explain three address instruction.
- d) Explain recording on magnetic disk.
- e) Explain i/o interface.
- f) Explain JMP, CALL, RET, SKP instruction.



3. A) Attempt **any two** of the following : **6**
- 1) Explain memory stack.
  - 2) Explain strobe method of data transfer.
  - 3) Explain optical memory.
- B) Explain characteristics of memory. **4**
4. Attempt **any two** of the following : **10**
- 1) Explain CPU-IOP communication.
  - 2) Explain Bit Slice Processor.
  - 3) Explain virtual memory.
5. Attempt **any two** of the following : **10**
- 1) Explain data transfer and data manipulation instruction.
  - 2) Explain memory mapped I/O.
  - 3) Explain memory connection to CPU.
-



|             |  |
|-------------|--|
| Seat<br>No. |  |
|-------------|--|

**B.Sc. (ECS) – II (Semester – III) (Old) Examination, 2015**  
**ENGLISH – I (Paper – VII)**

Day and Date : Friday, 27-11-2015  
Time : 2.30 p.m. to 4.30 p.m.

Max. Marks : 50

***N.B. : 1) All questions are compulsory.***  
***2) Figures to the right indicate full marks.***

1. A) Fill in the blanks in the following sentences by choosing the correct alternatives. **6**
- 1) First information report is always written by an \_\_\_\_\_  
a) Group  
b) Collective  
c) Individual  
d) None of above
  - 2) \_\_\_\_\_ is placed between three or more items in a series.  
a) Colon  
b) Comma  
c) Semicolon  
d) Full stop
  - 3) \_\_\_\_\_ contains name and address of a company.  
a) Address bar  
b) Letter head  
c) Body of the letter  
d) None
  - 4) \_\_\_\_\_ report is required when an organization intends to launch a new product in the market.  
a) Project  
b) Survey  
c) Missing  
d) Investigation
  - 5) Minutes of the meeting are always written in \_\_\_\_\_ tense.  
a) simple present  
b) simple past  
c) future  
d) continuous
  - 6) Righteous conduct is \_\_\_\_\_  
a) Attitude  
b) Tendency  
c) Value  
d) Activity





B) Match the pairs.

4

**A**

- 1) Report of weekly sales
- 2) Abstract
- 3) Drafted by secretary
- 4) Universal value

**B**

- a) Peace
- b) Minutes
- c) Summary of a report
- d) Periodic
- e) Paper work

2. Give brief answers to the following questions (**any five**).

10

- 1) What is narration ?
- 2) Define the term Attitude and Value.
- 3) Draw a Pie diagram of any information.
- 4) What are the contents included in bio-data ?
- 5) Give the examples of Notice agenda and minutes of the meeting.
- 6) What is the difference between routine and nonroutine reports ?

3. A) Write short notes on **any two** of the following.

6

- 1) Explain terminal and instrumental values with suitable examples.
- 2) Explain five universal values.
- 3) Explain the paper work for regular meeting.

B) Attempt **any two** of the following.

4

- 1) Write a paragraph on the availability of wards in a hospital by drawing imaginative Pie – diagram.



- 2) Represent the information given below in a bar-diagram.  
Percentage of admissions to the three faculties in college.

| Courses | 2008/09 | 2009/10 | 2010/11 |
|---------|---------|---------|---------|
| B.B.A.  | 52 %    | 56 %    | 58 %    |
| B.C.A.  | 27 %    | 24 %    | 21 %    |
| B.C.S.  | 21 %    | 20%     | 21 %    |

- 3) Explain Punctuation marks.
4. Attempt **any one** of the following. **10**
- 1) Draft an application for the post of software Engineer with resume.
  - 2) Difference between minutes and reports.
5. Narrate your first experience of how you taken your younger brother's admission at college. **10**
-





|          |  |
|----------|--|
| Seat No. |  |
|----------|--|

**B.Sc. (ECS) – II (Semester – IV) Examination, 2015  
OPERATING SYSTEM – II (New) (Paper – I)**

Day and Date : Saturday, 28-11-2015  
Time : 10.30 a.m. to 12.30 p.m.

Max. Marks : 50

**Instructions :** 1) Figures to the **right** indicate **full** marks.  
2) **All** questions are **compulsory**.

1. Multiple choice questions :

10

- 1) The minimum number of process involved in any deadlock can be
  - a) One
  - b) Two
  - c) More than two
  - d) Any number
- 2) Compaction is a solution for
  - a) Internal fragmentation
  - b) External fragmentation
  - c) Both
  - d) None of these
- 3) In contiguous file allocation
  - a) The blocks allocated in memory have to be continuous
  - b) The blocks need not be continuous
  - c) The blocks can be continuous or noncontinuous
  - d) None of the above
- 4) UNIX operating system is an
  - a) Time sharing OS
  - b) Multiuser OS
  - c) Multitasking OS
  - d) All the above
- 5) The process can be moved during its execution from one memory segment to another at
  - a) Compile time
  - b) Load time
  - c) Execution time
  - d) Both a and b



- 6) When a page must be replaced, \_\_\_\_\_ chooses the page that has not been used for the longest period of time.
- a) LRU                      b) FIFO                      c) Optimal                      d) None of these
- 7) \_\_\_\_\_ allocation solves all problems of contiguous allocation.
- a) Contiguous              b) Linked                      c) Direct                      d) Indirect
- 8) When a deadlock occurs, the system has to be in
- a) Safe state                      b) Unsafe state
- c) Any one of two states                      d) None of these
- 9) Demand paging is a \_\_\_\_\_ system.
- a) Virtual memory                      b) Job scheduling
- c) CPU scheduling                      d) None
- 10) To enable a process to be larger than the amount of memory allocated to it, we can use
- a) Swapping                      b) Paging                      c) Overlays                      d) None of these

2. Answer **any five** of the following :

**10**

- 1) Explain tree structure directory.
- 2) What is deadlock ?
- 3) Explain disadvantages of buffer cache.
- 4) Explain different file access methods.
- 5) What is paging ?
- 6) Explain features of UNIX OS.

3. A) Answer **any two** of the following :

**6**

- 1) Write a note on swapping.
- 2) Explain FIFO page replacement algorithm with suitable example.
- 3) Explain layout of system memory.

B) Explain different allocation method used in a file system.

**4**



4. Answer **any two** of the following : 10
- 1) Write a note on deadlock prevention.
  - 2) Explain process states and transitions.
  - 3) Explain structure of buffer header and buffer pool.
5. Answer **any two** of the following : 10
- 1) Write a note on segmentation.
  - 2) What is safe and unsafe states of a system ? It is possible that a system is in unsafe state but not deadlocked ?
  - 3) Explain architecture of the UNIX OS.
-



|          |  |
|----------|--|
| Seat No. |  |
|----------|--|

**B.Sc. (ECS) – II (Semester – IV) Examination, 2015**  
**OBJECT ORIENTED PROGRAMMING USING ‘C++’ – II (New) (Paper – II)**

Day and Date : Monday, 30-11-2015  
Time : 10.30 a.m. to 12.30 p.m.

Max. Marks : 50

**Instructions:** 1) **All questions are compulsory.**  
2) **Figures to the right place indicate full marks.**

1. Choose correct alternative :

10

- 1) All parameterized manipulator belongs to \_\_\_\_\_ header file.  
a) manip.h            b) iomanip.h        c) format.h            d) both b) and c)
- 2) \_\_\_\_\_ allows reusability of code.  
a) Data Encapsulation                            b) Polymorphism  
c) Inheritance                                      d) None of these
- 3) File can be opened by using \_\_\_\_\_  
a) Open ()                                            b) Constructor  
c) Both a) and b)                                    d) Friend function
- 4) \_\_\_\_\_ class cannot be instantiated.  
a) Friend                            b) Inherited        c) Abstract            d) Both b) and c)
- 5) \_\_\_\_\_ mode is used to seek the end of file at opening.  
a) ios :: in                            b) ios :: app        c) ios :: ated        d) ios :: out
- 6) Constructors are executed from \_\_\_\_\_ class to \_\_\_\_\_ class in inheritance.  
a) Base, Derived                                    b) Base, Base  
c) Derived, Base                                    d) Derived, Derived
- 7) 'cin' is predefined object of \_\_\_\_\_ class.  
a) istream                                            b) ostream  
c) both a) and b)                                    d) none of these



- 8) If we declare function as \_\_\_\_\_ in base class then it is necessary to define in its derived class.  
a) inline                      b) abstract                      c) pure virtual                      d) friend
- 9) In \_\_\_\_\_ type of inheritance, virtual base class is used.  
a) Single                      b) Multiple                      c) Hierarchical                      d) Mutli-path
- 10) In private derivation of class, public data of base class becomes \_\_\_\_\_ for derived class.  
a) Public                      b) Private                      c) Protected                      d) Not inherited

2. Answer **any five** from following : **10**
- 1) What is Manipulator ? List out any four manipulators with their use.
  - 2) Define : Pure Virtual Function.
  - 3) What is File ? List out different file opening modes.
  - 4) Write behaviour of constructor and destructor in inheritance.
  - 5) Explain 'this' keyword.
  - 6) What is Stream ? Write use of input and output streams.
3. A) Answer **any two** from following : **6**
- 1) Explain types of derivation of new class in detail.
  - 2) Explain functions of istream class.
  - 3) Explain nesting of classes.
- B) Write a program to implement multi-level inheritance. **4**
4. Answer **any two** of following : **10**
- 1) Write a program that reads 10 numbers and write only odd numbers into file.
  - 2) Explain try, catch and throw with example.
  - 3) What is Runtime polymorphism ? How it is achieved in C++ ?
5. Answer **any two** of following : **10**
- 1) Write a program that demonstrates the use of pure virtual function.
  - 2) Write a program to implement custom manipulator.
  - 3) What is Inheritance ? Explain its different types.
-





|          |  |
|----------|--|
| Seat No. |  |
|----------|--|

**B.Sc. (ECS) – II (Semester – IV) (New) Examination, 2015  
Paper – III : DATA STRUCTURES AND ALGORITHMS – II**

Day and Date : Tuesday, 1-12-2015  
Time : 10.30 a.m. to 12.30 p.m.

Max. Marks : 50

**N.B. :** 1) **All questions are compulsory.**  
2) Figures to the **right** place indicate **full** marks.

1. Choose correct alternatives. 10

- 1) \_\_\_\_\_ is hierarchical data structure.  
a) Linked list      b) Tree      c) Graph      d) Both b & c
- 2) \_\_\_\_\_ operation is fast in case of AVL tree.  
a) Insert      b) Remove      c) Search      d) Both a & b
- 3) \_\_\_\_\_ sorting method uses divide and conquer strategy.  
a) Bubble      b) Quick      c) Merge      d) Both b & c
- 4) \_\_\_\_\_ search method requires data to be sorted first.  
a) Sequential      b) Linear      c) Binary      d) Both a & b
- 5) In a binary expression tree, parent node is always \_\_\_\_\_.  
a) Operator      b) Operand      c) Parenthesis      d) None of these
- 6) For implementation of DFS traversal of graph \_\_\_\_\_ data structure is used.  
a) Array      b) Queue      c) Stack      d) Linked list
- 7) Traversing binary tree with preorder method gives ascending order of element.  
a) True      b) False
- 8) \_\_\_\_\_ sort is an example of exchange sort method.  
a) Bubble      b) Quick      c) Selection      d) All of these



9) The degree of node of binary tree may be greater than two.  
a) True                      b) False

10) The node whose indegree is 1 and outdegree is 0 then it is called 'Pendant node'.  
a) True                      b) False

2. Answer **any five** of the followings. **10**

- 1) What is Tree ? List out its applications.
- 2) What is Sorting ? List out different sorting methods.
- 3) What is Strictly and complete binary tree ?
- 4) What is Directed and Undirected graph ?
- 5) What is 'Collision' in hashing ?
- 6) Give advantages of Threaded binary tree.

3. A) Attempt **any two** of the followings. **6**

- 1) Explain 'Selection' sort method in detail.
- 2) Write an algorithm to insert node in binary search tree.
- 3) Explain following Hash Functions :
  - I) Truncation Method
  - II) Mid square Method.

B) Represent any directed graph using adjacency matrix and adjacency list. **4**

4. Answer **any two** of the followings. **10**

- 1) Write a program to implement bubble sort method.
- 2) Explain BFS traversal of graph with example.
- 3) What is searching ? Explain 'Binary Search' method in detail.

5. Answer **any two** of the followings. **10**

- 1) What is Traversal ? Explain tree traversal methods in detail.
  - 2) Explain 'Insertion Sort' method in detail.
  - 3) Explain 'Indexed sequential Search' in detail.
-



|             |  |
|-------------|--|
| Seat<br>No. |  |
|-------------|--|

**B.Sc. (ECS) (Part – II) (Semester – IV) (New) Examination, 2015**  
**Paper – V : ORGANIZATION OF PC – II**

Day and Date : Thursday, 3-12-2015

Max. Marks : 50

Time : 10.30 a.m. to 12.30 p.m.

**N.B. :** 1) **All questions are compulsory.**  
2) Figures to the **right** place indicate **full** marks.

1. Choose correct alternatives. **10**

- 1) Intel \_\_\_\_\_ chip set is designed for the intel pentium III processor.  
a) 865 G                      b) 810 E                      c) 745 A                      d) None of these
- 2) The power dissipation of \_\_\_\_\_ logic family is less.  
a) TTL                      b) MOS                      c) IIL                      d) None of these
- 3) \_\_\_\_\_ uses dual ring architecture in network.  
a) SMD                      b) SMT                      c) FDDI                      d) NIC
- 4) The \_\_\_\_\_ processor is designed for uniprocessor based PC.  
a) Pentium III                      b) Celeron                      c) 80486                      d) None of these
- 5) For 2 to 1 PAL \_\_\_\_\_ fuses are used.  
a) 5                      b) 6                      c) 7                      d) 8
- 6) A signal shared medium is an Ethernet  
a) Node                      b) Frame                      c) Segment                      d) Medium
- 7) The gates used in VLSI technology are  
a) greater than 50000                      b) less than 50000  
c) 50000                      d) none of these
- 8) A \_\_\_\_\_ is essentially a multiport bridge.  
a) domain                      b) switch                      c) source                      d) none of these



- 9) The 80286 works in \_\_\_\_\_ modes.  
a) 2                      b) 3                      c) 4                      d) 5
- 10) \_\_\_\_\_ topology scheme combine multiple topology into one large topology.  
a) Hybrid                b) Logical                c) Tree                      d) None of these

2. Attempt **any five** of the following : **10**

- 1) Give the network software.
- 2) Draw internal organisation of 80286.
- 3) List the hardware component used in IBM PC.
- 4) Give specification of latest motherboard.
- 5) Give network goals.
- 6) Give different IC logic families.

3. A) Attempt **any two** of the following : **6**

- 1) Explain networking methods.
- 2) Give difference between Pentium and 80486.
- 3) Give hardware of the network.

B) Write a note on PLD. **4**

4. Attempt **any two** of the following : **10**

- 1) Explain Pentium master checker configuration.
- 2) Explain classification of transmission media.
- 3) Explain PLA.

5. Attempt **any two** of the following : **10**

- 1) Explain networking structure.
  - 2) Explain SMD and SMT.
  - 3) Explain RISC and CISC approach.
-



|             |  |
|-------------|--|
| Seat<br>No. |  |
|-------------|--|

**B.Sc. (E.C.S.) (Part – II) (Semester – IV) (New) Examination, 2015**  
**Paper – VI : MICROPROCESSORS – II**

Day and Date : Friday, 4-12-2015  
Time : 10.30 a.m. to 12.30 p.m.

Max. Marks : 50

**N. B. :** 1) **All questions are compulsory.**  
2) **Figures to the right place indicate full marks.**

1. Choose correct alternatives :

10

- 1) \_\_\_\_\_ is the data transfer instruction.  
a) IN                      b) JUMP                      c) ADD                      d) CLS
- 2) The memory capacity of 8086 is \_\_\_\_\_  
a) 1 MB                      b) 64 KB                      c) 1 GB                      d) 64 MB
- 3) The 8255 has \_\_\_\_\_ I/O Ports.  
a) 1                      b) 2                      c) 3                      d) 4
- 4) The 8086 works in \_\_\_\_\_ modes.  
a) 1                      b) 2                      c) 3                      d) 4
- 5) MOV AX, [BX] is \_\_\_\_\_ type addressing mode.  
a) Register to register                      b) Register indirect  
c) Indirect addressing                      d) None of these
- 6) \_\_\_\_\_ is the processor control instruction.  
a) JNZ                      b) CLD                      c) POP                      d) HOLD
- 7) The Pentium II processor introduced in \_\_\_\_\_  
a) 1995                      b) 1997                      c) 1999                      d) 2000
- 8) The bit length of segment register is \_\_\_\_\_ bit.  
a) 16                      b) 20                      c) 8                      d) 14
- 9) The 80286 is a \_\_\_\_\_ bit processor.  
a) 16                      b) 20                      c) 8                      d) 14
- 10) In absolute decoding each location has \_\_\_\_\_ address.  
a) Variable                      b) Fixed                      c) Zero                      d) None of these



2. Attempt **any five** of the following. **10**
- 1) Explain flag registers of advanced processor.
  - 2) Explain arithmetic instructions.
  - 3) Give difference between 8086 and 8088.
  - 4) Explain instruction queue in 8086.
  - 5) Explain general purpose registers of advanced processor.
  - 6) Give features of advanced processor.
3. A) Attempt **any two** of the following. **6**
- 1) Explain logical instructions.
  - 2) Explain channels of 8257.
  - 3) Explain segment register of 8086.
- B) Explain control word of 8255. **4**
4. Attempt **any two** of the following. **10**
- 1) Explain conditional and unconditional instructions of 8086.
  - 2) Explain maximum mode operation of 8086.
  - 3) Explain interfacing between K/B and display.
5. Attempt **any two** of the following. **10**
- 1) Explain different data transfer instructions with example.
  - 2) Explain EU section of 8086.
  - 3) Explain 8253 with suitable diagram.
-



|             |  |
|-------------|--|
| Seat<br>No. |  |
|-------------|--|

**B.Sc. (ECS) – II (New) (Sem. – IV) Examination, 2015  
ENGLISH – II (Paper – VII)**

Day and Date : Saturday, 5-12-2015  
Time : 10.30 a.m. to 12.30 p.m.

Max. Marks : 50

**N. B. :** i) **All questions are compulsory.**  
ii) **Figures to the right indicate full marks.**

1. A) Fill in the blanks in the following sentences by choosing the correct alternatives.

6

- 1) Handshake indicates \_\_\_\_\_
  - a) Oral Communication
  - b) Verbal Communication
  - c) Non-verbal Communication
  - d) Mutual Communication
- 2) Academic intelligence is not mere sufficient to success in life.
  - a) An opinion
  - b) Argument
  - c) Fact
  - d) None of above
- 3) Human skills is the ability \_\_\_\_\_
  - a) to work well in cooperation with oneself
  - b) to work well in cooperation with other persons
  - c) to work well in cooperation with organization
  - d) to work well in cooperation with an entity
- 4) Bodily-Kinesthetic means \_\_\_\_\_
  - a) Control of one's own body motion and the ability to manipulate objects with precision
  - b) Control of one's mind
  - c) Control of other's mind
  - d) All of the above



- 5) An interview is a \_\_\_\_\_
- a) Conversation between two different parties
  - b) Conversation between the interviewer and the interviewee
  - c) Conversation between one person to more people
  - d) Conversation between two same category
- 6) LTM stands for \_\_\_\_\_
- a) Low Timed Memory
  - b) Lower Traced Memory
  - c) Long Term Memory
  - d) Left Term Memory

1. B) State whether following statement are **true** or **false**.

**4**

- 1) Self-esteem as a confidence and satisfaction in oneself.
- 2) Group dynamics is the study of groups and also a general term for group process.
- 3) Strength and weakness are not the inner feelings.
- 4) A conclusion is where the whole group decides in favour or against the topic.

2. Give brief answers to the following questions (**any five**).

**10**

- 1) What is group dynamics ?
- 2) What is an exit interview ?
- 3) What is conceptual ability ?
- 4) What is group discussion ?
- 5) What is the difference between self-concept and self image ?
- 6) What is face to face interview and telephone interview ?





3. A) Write short notes on **any two** of the following. **6**
- 1) How to prepare the resume ?
  - 2) What is learning ? Explain the process of learning.
  - 3) Explain taking notes and making notes.
3. B) Attempt **any one** of the following. **4**
- 1) State the importance of writing skills.
  - 2) How to conduct seminar ?
4. Attempt **any one** of the following. **10**
- 1) Give full information interview process.
  - 2) Discuss the secrets of effective group discussions.
5. Write a presentation of newly developed software about library. **10**
-



|          |  |
|----------|--|
| Seat No. |  |
|----------|--|

**B.Sc. (ECS) – II (Semester – IV) Examination, 2015**  
**OPERATING SYSTEM – II (Old)**  
**Paper – I**

Day and Date : Saturday, 28-11-2015  
Time: 10 .30 a.m. to 12 .30 p.m.

Max. Marks : 50

1. Multiple Choice Questions. 10

- 1) Paging suffers from
  - a) internal fragmentation
  - b) external fragmentation
  - c) both
  - d) none of the above
- 2) Out of four necessary conditions \_\_\_\_\_ must hold simultaneously for a deadlock to occur.
  - a) One
  - b) Two
  - c) Three
  - d) Four
- 3) Virtual Memory is \_\_\_\_\_
  - a) An extremely large main memory
  - b) An extremely large secondary memory
  - c) An illusion of extremely large main memory
  - d) A type of memory used in super computers
- 4) What is a shell ?
  - a) It is a hardware component
  - b) It is a command Interpreter
  - c) It is a part of compiler
  - d) It is a tool in CPU scheduling.
- 5) \_\_\_\_\_ allocation method does not support direct access.
  - a) Index
  - b) Contiguous
  - c) Linked
  - d) All of the above
- 6) Compaction is a solution for
  - a) Internal Fragmentation
  - b) External Fragmentation
  - c) Both
  - d) None of these

P.T.O.



- 7) \_\_\_\_\_ begins at the root and follows a path down to the specified file.
- a) Relative Path Name                      b) Absolute Path Name  
c) Standalone Path Name                  d) All of the above
- 8) Physical memory is broken into fixed sized blocks called \_\_\_\_\_
- a) Pages                      b) Frames                      c) Blocks                      d) Segments
- 9) The base register is used for static relocation.
- a) True                      b) False
- 10) The UNIX OS was written in \_\_\_\_\_ language.
- a) 'C'                      b) C++                      c) JAVA                      d) C#
2. Write short notes on the following (**any five**): **10**
- 1) File attributes.
  - 2) Differentiate between logical address and physical address.
  - 3) Safe and Unsafe states.
  - 4) Concepts of swapping.
  - 5) Buffer headers in UNIX OS.
  - 6) Fragmentation.
3. A) Answer **any two** of the following : **6**
- 1) Explain operations of files in detail.
  - 2) Explain concept of demand paging in detail.
  - 3) What are the advantages and disadvantages of Buffer cache ?
- B) Explain Memory allocation method of Multiprogramming with Variable Number of Tasks in detail. **4**
4. Answer **any two** of the following : **10**
- 1) Explain Bankers algorithm in detail.
  - 2) Explain Architecture of UNIX OS.
  - 3) Write a note on directory structure.
5. Answer **any two** of the following : **10**
- 1) Explain File Allocation methods in detail.
  - 2) Write a note of page Replacement algorithms with an example.
  - 3) Write a note on file system in UNIX operating system.
-



|             |  |
|-------------|--|
| Seat<br>No. |  |
|-------------|--|

**B.Sc. (ECS) – II (Semester – IV) Examination, 2015**  
**OBJECT ORIENTED PROGRAMMING USING C++ – II (Paper – II)**  
**(Old)**

Day and Date : Monday, 30-11-2015  
Time : 10.30 a.m. to 12.30 p.m.

Max. Marks : 50

**Instructions :** 1) **All questions are compulsory.**  
2) **Figures to the right indicate full marks.**

1. Choose correct alternatives : 10

- 1) The manipulator setfill ( ) is performed following action
  - a) sets the fill character
  - b) sets the field width
  - c) sets the floating point precision
  - d) none of these
- 2) Function seekg ( ) includes in \_\_\_\_\_ header file.
  - a) iostream.h
  - b) ifstream.h
  - c) string.h
  - d) conio.h
- 3) Which allows you to create a derived class that inherits properties from more than one base class ?
  - a) Multilevel inheritance
  - b) Multiple inheritance
  - c) Hybrid inheritance
  - d) Hierarchical inheritance
- 4) The file ifstream includes
  - a) The declaration of the basic file standard input library
  - b) The declaration of the basic file standard output library
  - c) Both a and b
  - d) None of these
- 5) There is a unique function in C++ program where all C++ programs start their execution.
  - a) start ( )
  - b) begin ( )
  - c) main ( )
  - d) output ( )



- 6) The mechanism of deriving a new class from an old/existing class is called
- a) inheritance
  - b) polymorphism
  - c) encapsulation
  - d) abstraction
- 7) Thrown exception can caught by \_\_\_\_\_ function.
- a) try
  - b) catch
  - c) throw
  - d) exception
- 8) The seek call `fout.seekg (O, ios :: beg)` perform following action
- a) go to the beginning of the file
  - b) go to end of file
  - c) stay at the current location of file
  - d) none of the above
- 9) Function `seekg ( )` performs following action
- a) Moves put file pointer to a specific location
  - b) Moves get file pointer to a specific location
  - c) Return the current position of the get pointer
  - d) Return the current position of the put pointer
- 10) Manipulator `setw ( )` is equalent to \_\_\_\_\_ ios class member function.
- a) `width ( )`
  - b) `precision ( )`
  - c) `fill ( )`
  - d) `setf ( )`

2. Answer **any five** of the following :

**(5×2 = 10)**

- 1) What is meant by polymorphism in C++ ?
- 2) What is the use of 'this' pointer ?
- 3) What is virtual base class ?
- 4) Draw access privilege table/diagram for members of a base and derived class.
- 5) List out the manipulators used in C++.
- 6) What is file ?



3. A) Answer **any two** of the following : (2×3=6)
- 1) What are the differences between ASCII and Binary files ?
  - 2) What is command line argument ? Give an example.
  - 3) Explain the need of virtual function.
- B) What is inheritance ? Explain the need of inheritance with suitable example. 4
4. Answer **any two** of the following : (2×5 = 10)
- 1) What is a file modes ? Describe the various file mode options available in C++.
  - 2) What are the virtual classes ? Explain the need for virtual classes while building class hierarchy.
  - 3) Draw console stream class hierarchy diagram and explain its members.
5. Answer **any two** of the following : (2×5 = 10)
- 1) Explain static and dynamic binding with suitable example.
  - 2) Explain various file stream classes needed for file manipulations.
  - 3) Explain the following terms in details :
    - A) Try
    - B) Catch
    - C) Throw.
-



|          |  |
|----------|--|
| Seat No. |  |
|----------|--|

**B.Sc. (ECS) – II (Semester – IV) (Old) Examination, 2015**  
**Paper – III : DATA STRUCTURES AND ALGORITHMS – II**

Day and Date : Tuesday, 1-12-2015  
Time : 10.30 a.m. to 12.30 p.m.

Total Marks : 50

**Instructions :** 1) **All questions are compulsory.**  
2) **Figures to the right place indicate full marks.**

1. Choose the correct alternatives : 10
- 1) A node that does not have any child is called \_\_\_\_\_  
a) leaf node                      b) terminal node    c) both a) and b)    d) none of these
  - 2) The searching technique suitable for unsorted arrays  
a) binary search                  b) linear search    c) both a) and b)    d) none of these
  - 3) Which of the following sorting algorithm is of divide and conquer type ?  
a) Bubble sort                      b) Insertion sort    c) Quick sort                  d) All of these
  - 4) A B-tree is kept balanced by requiring that all leaf nodes are at the same path.  
a) True                                  b) False
  - 5) A binary tree with n internal nodes has \_\_\_\_\_ maximum of external nodes.  
a) n                                          b) n + 1                      c) n + 2                      d) n + 3
  - 6) A technique for direct search is \_\_\_\_\_  
a) linear search                      b) binary search    c) hashing                      d) tree search
  - 7) The total number of levels in a tree is the \_\_\_\_\_ of the tree.  
a) height                                  b) count                      c) length                      d) degree
  - 8) Searching refers finding the location of a particular record in the stored data structure.  
a) True                                  b) False
  - 9) Hashing is a \_\_\_\_\_ technique.  
a) insertion                              b) merging                      c) sorting                      d) searching
  - 10) Graph is a non-linear data structure.  
a) True                                  b) False



2. Answer **any five** of the following : **10**
- 1) Give postorder tree traversal example.
  - 2) Give the advantages of dynamic representation of binary tree.
  - 3) Give the advantages of non-linear data structures.
  - 4) What is connected graph ?
  - 5) What is searching ?
  - 6) What is complete binary tree ?
3. A) Answer **any two** of the following : **6**
- 1) What is the concept of sorting ?
  - 2) Give the drawbacks of linear search.
  - 3) What is strictly binary tree ? Give one example.
- B) Give the applications of tree. **4**
4. Answer **any two** of the following : **10**
- 1) Explain the following terms :
    - i) Directed graph
    - ii) Undirected graph.
  - 2) Write a function to check whether a binary tree is binary search tree or not.
  - 3) Explain DFS in detail.
5. Answer **any two** of the following : **10**
- 1) Construct a binary search tree whose preorder traversal is  
67 34 12 45 38 60 80 78 95 90
  - 2) Explain the technique of radix sort
  - 3) Explain tree data structure.
-





|             |  |
|-------------|--|
| Seat<br>No. |  |
|-------------|--|

**B.Sc. (ECS) – II (Semester – IV) (Old) Examination, 2015  
(Paper – IV) : COMPUTER SCIENCE  
Software Engineering – II**

Day and Date : Wednesday, 2-12-2015  
Time : 10.30 a.m. to 12.30 p.m.

Max. Marks : 50

**Instructions :** 1) **All questions are compulsory.**  
2) **Figures to the right indicate full marks.**

1. Choose correct alternative : 10
- 1) Which of the following is not part of DFD ?
    - a) arrow
    - b) process
    - c) disk storage
    - d) data store
  - 2) \_\_\_\_\_ that can support one or two activities within software process like configuration control or coding.
    - a) Workbench
    - b) Environment
    - c) Both a and b
    - d) None of these
  - 3) In statistics of data flow
    - a) no of data flows incoming and outgoing from each process
    - b) rate of each data flow
    - c) response time expected
    - d) all of these
  - 4) If different branches work with varying speeds then bottom up approach implementation at bottom generates problem.
    - a) True
    - b) False
  - 5) \_\_\_\_\_ is a process of executing a program with an objective of finding an error.
    - a) Software testing
    - b) Software analysis
    - c) Software design
    - d) None of above





4. Answer **any two** of the following : **10**
- 1) Draw CLD for college admission system.
  - 2) Explain statistics on data store.
  - 3) State design principles of output.
5. Answer **any two** of the following : **10**
- 1) Explain White Box Testing.
  - 2) Explain integrated CASE environment
  - 3) What is data capture ? State its objectives.
-





|             |  |
|-------------|--|
| Seat<br>No. |  |
|-------------|--|

**B.Sc. (ECS) – II (Semester – IV) (Old) Examination, 2015**  
**Paper – V : ORGANIZATION OF PC II**

Day and Date : Thursday, 3-12-2015

Total Marks : 50

Time : 10.30 a.m. to 12.30 p.m

**Instructions :** i) **All questions are compulsory and carry equal marks.**  
ii) **Draw neat diagram wherever necessary.**

1. Fill in the blanks with correct alternative and rewrite : **10**

- 1) TTL logic uses power supply \_\_\_\_\_  
a) 5 V                      b) 10 V                      c) 3 V                      d) 15 V
- 2) In \_\_\_\_\_ components mounting is only on one side of PCB.  
a) SMD                      b) SMC                      c) SMT                      d) PTH
- 3) The \_\_\_\_\_ uses a four level memory protection.  
a) 80186                      b) 80286                      c) 80386                      d) 80486
- 4) Inter pentium is \_\_\_\_\_ bit up.  
a) 8                              b) 16                              c) 32                              d) 64
- 5) Radio waves are \_\_\_\_\_  
a) unidirectional                              b) bidirectional  
c) omnidirectional                              d) none of these
- 6) \_\_\_\_\_ is a embedded processor.  
a) 4051                              b) 8051                              c) pentium pro                              d) 8041
- 7) Bluetooth is \_\_\_\_\_ media.  
a) wired                              b) guided                              c) wireless                              d) both a and c
- 8) In \_\_\_\_\_ two systems can communicate in both direction simultaneously.  
a) simplex                              b) half duplex                              c) full duplex                              d) both a and b



- 9) A \_\_\_\_\_ takes weakened or corrupted signal and regenerate it.  
a) Hub                                      b) Switch                                      c) Repeater                                      d) Router
- 10) In a \_\_\_\_\_ topology each node is connected to a central hub.  
a) Star                                      b) Ring                                      c) Bus                                      d) Mesh

2. Answer **any five** of the following : **10**
- a) Define :
    - 1) Propagation delay
    - 2) Fanout.
  - b) Give features of CISC.
  - c) Give advantages of repeater.
  - d) Write seven layer of OSI reference model.
  - e) What is LSI and VLSI in IC ? Give brief idea.
  - f) Give advantages of MOS.
3. A) Answer **any two** of the following : **6**
- 1) Explain CMOS characteristics briefly.
  - 2) Give features of pentium.
  - 3) Give characteristics of embedded system.
- B) Explain FPGA. **4**
4. Attempt **any two** of the following : **10**
- 1) Explain PLD and GAL in detail.
  - 2) Explain NIC.
  - 3) Give advantages of SMT techniques.
5. Attempt **any two** of the following : **10**
- 1) Explain bridge and router.
  - 2) Explain network topologies.
  - 3) Explain fibre optics cable and its advantages.
-



|          |  |
|----------|--|
| Seat No. |  |
|----------|--|

**B.Sc. (ECS) – II (Semester – IV) Examination, 2015**  
**MICROPROCESSOR – II (Paper – VI) (Old)**

Day and Date : Friday, 4-12-2015  
Time : 10.30 a.m. to 12.30 p.m.

Max. Marks : 50

**N. B. :** 1) **All questions are compulsory.**  
2) Figures to **right** indicate get **full** marks.

1. Choose correct alternatives.

10

- 1) In linear decoding \_\_\_\_\_ line is used to generate chip select.  
a)  $A_{14}$                       b)  $A_{19}$                       c)  $A_{16}$                       d)  $A_{14-19}$
- 2) 8253 contains \_\_\_\_\_ counters.  
a) 3                              b) 2                              c) 4                              d) 8
- 3) XLAT is \_\_\_\_\_ instruction.  
a) Arithmetic                      b) Logical  
c) Data transfer                      d) String
- 4) Clock speed of 80386 is \_\_\_\_\_ MHz.  
a) 66                              b) 50                              c) 60                              d) 100
- 5) AAA is \_\_\_\_\_ instruction.  
a) logical                      b) string                      c) arithmetic                      d) processor
- 6) 8237 is \_\_\_\_\_ pin IC.  
a) 20                              b) 24                              c) 14                              d) 40
- 7) \_\_\_\_\_ is program control instruction.  
a) JCXZ                      b) AAA                      c) STC                      d) ANI
- 8) 80286 is \_\_\_\_\_ pin IC package.  
a) 20                              b) 40                              c) 68                              d) 24
- 9) 8255 has \_\_\_\_\_ I/O ports.  
a) 2                              b) 3                              c) 4                              d) 8
- 10) Address bus of 80286 is \_\_\_\_\_ bit.  
a) 24                              b) 16                              c) 20                              d) 32

P.T.O.



2. Attempt **any five** of the following. **10**
- 1) Explain mode set register of 8257.
  - 2) Explain rotate instructions.
  - 3) Explain features of 80386.
  - 4) Explain any two modes of 8253.
  - 5) Explain features of pentium IV.
  - 6) Explain AAA, DAA, AAS, DAS instructions.
3. A) Attempt **any two** of the following. **6**
- 1) Explain string instructions.
  - 2) Explain absolute address decoding.
  - 3) Compare pentium pro and p-II.
- B) Explain flag register of 32 bit processor. **4**
4. Attempt **any two** of the following. **10**
- 1) Explain features of pentium – III.
  - 2) Explain data transfer instruction of 8086.
  - 3) Explain 8255 with block diagram.
5. Attempt **any two** of the following. **10**
- 1) Compare features of 80286 and 80486.
  - 2) Write program for addition, subtraction, multiplication and division.
  - 3) Explain interfacing of keyboard.
-







- 5) New medical technologies can be improved upon in such a way that
- all families get employment
  - there are no side effects
  - they are provided free of cost
  - all women have access to them
- 6) \_\_\_\_\_ watches the sun-rise.
- A grey baboon
  - A statue
  - A kokila
  - A man
- 7) A baby watched a
- Ford
  - Lake
  - River
  - Pond
- 8) We are all
- Casualties
  - Tragedy
  - Comedy
  - Tragi-comedy
- 9) Shukra Neeti has written a book on
- Labour Management
  - Personal Management
  - Account Management
  - House Management
- 10) Cliff and Bill were working on
- C++
  - Computer
  - Telephone
  - Calculating machine

2. Answer **any five** of the following questions in brief :

10

- Who is the narrator of the story 'Nobody Here But' ?
- Which book describes flying vehicles in Sanskrit ?
- What prize did the talkative man get ?
- What is amniocentesis ?
- Who is watching the sun-rise ?
- Write the theme of 'Wagtail and Baby'.



3. A) Write short answers on **any two** of the following : **6**
- 1) Negative effects of work, food and health.
  - 2) Describe the 'Gaiety land'.
  - 3) Write the theme of 'Our Casuarina Tree'.
- B) Write short answers on **any two** of the following : **4**
- 1) Write the expression of discouraging.
  - 2) How to write a report ?
  - 3) Prepare five questions for interview in industry.
4. Attempt **any one** of the following : **10**
- 1) Write an application for the post of lecturer.
- OR
- 2) Write a report on youth festival held in your college.
5. Write an interview with a well-known Hindi film star 'Amir Khan'. **10**
-



|             |  |
|-------------|--|
| Seat<br>No. |  |
|-------------|--|

**B.Sc. (ECS) – III (Semester – V) (New) Examination, 2015**  
**DATA COMMUNICATION AND NETWORKING – I**  
**(Paper – I)**

Day and Date : Thursday, 29-10-2015

Max. Marks : 50

Time : 2.30 p.m. to 4.30 p.m.

**Instructions :** 1) **All** questions are **compulsory**.  
2) Figures to the **right** indicate **full** marks.

1. Choose the correct alternative : 10

- 1) Lightning causes \_\_\_\_\_ noise.  
1) Thermal                      2) Impulse                      3) Background                      4) Random
- 2) \_\_\_\_\_ involves grouping many separate wires into a common cable enclosure.  
1) SDM                              2) TDM                              3) FDM                              4) All
- 3) \_\_\_\_\_ creates a redundant connection.  
1) Star                              2) Ring                              3) Hierarchical                      4) Mesh
- 4) \_\_\_\_\_ is example of session layer.  
1) Browser                              2) Network file system  
3) SNMP                              4) LLC
- 5) Packet switching uses \_\_\_\_\_ transmission.  
1) queuing                              2) store and forward  
3) master-slave                              4) polling and selection
- 6) Cordless telephone uses \_\_\_\_\_ characteristic.  
1) Unidirectional                              2) Omnidirectional  
3) Bidirectional                              4) Focused beam

P.T.O.



- 7) The \_\_\_\_\_ of the link between the source and destination is required for effective data exchange.
- |                |                |
|----------------|----------------|
| 1) initiation  | 2) maintenance |
| 3) termination | 4) all         |
- 8) Sender times out too early, acknowledgment is on the way \_\_\_\_\_ will send a duplicate frames.
- |        |                 |
|--------|-----------------|
| 1) CRC | 2) Hamming code |
| 3) ARQ | 4) Pathrouting  |
- 9) Congestion is caused by
- |                            |                    |
|----------------------------|--------------------|
| 1) Slow links              | 2) Slow processors |
| 3) Packets from many lines | 4) All             |
- 10) \_\_\_\_\_ are based on treating bit strings as representation of polynomials with co-efficients of 0 and 1 only.
- |               |              |        |              |
|---------------|--------------|--------|--------------|
| 1) Parity bit | 2) Baud rate | 3) CRC | 4) Harmonics |
|---------------|--------------|--------|--------------|

2. Attempt (**any five**) :

10

- 1) Explain Fiber optics.
- 2) Why flow control is required in Datalink layer ?
- 3) Explain Analog Vs Digital signal.
- 4) List components of Computer Network.
- 5) What is congestion ?
- 6) Explain Shortest Path Routing.

3. A) Attempt (**any two**) :

6

- 1) What are different types of multiplexing ?
- 2) What are services of data link layer ?
- 3) Differentiate between virtual circuit and datagram.

B) What is Internetworking ? List various applications of Internet.

4



4. Attempt (**any two**) : **10**
- 1) State Nyquist and Shannon theorem.
  - 2) Explain simplex stop-and-wait protocol.
  - 3) What is Routing ? Explain Multicast Routing.
5. Attempt (**any two**) : **10**
- 1) Write a note on Message switching.
  - 2) Write a note on Error detection and correction.
  - 3) Write a note on OSI Vs TCP/IP reference model.
-









- 8) The overall design of database is known as \_\_\_\_\_  
a) Data                      b) Instances              c) Schema                  d) Record
- 9) Grant and Revoke are \_\_\_\_\_  
a) DDL                      b) DML                      c) DCL                      d) None of these
- 10) Projection operation denoted by Greek symbol  
a) Sigma ( $\sigma$ )          b) Pie ( $\pi$ )                  c) Rho ( $\rho$ )                  d) Cross ( $\times$ )

2. Attempt **any five** : **10**
- 1) Define DBMS. List out application.
  - 2) What is specialization ?
  - 3) Write a syntax for view.
  - 4) What is hashing ?
  - 5) List out date functions.
  - 6) List out types of database user's.
3. A) Attempt **any two** : **6**
- 1) Explain DML operations.
  - 2) Explain mapping cardinality.
  - 3) Explain joint operation in Relational Algebra.
- B) Write a note on Functional Dependency. **4**
4. Attempt **any two** : **10**
- 1) Write Dr. E. F. Codd's Rules for Relational data model any five.
  - 2) Write a difference between file based system and database system.
  - 3) Explain various methods of indexing.
5. Attempt **any two** : **10**
- 1) Explain different integrity constraints.
  - 2) Write a note on Aggregate function.
  - 3) Draw notations for E-R diagram.
-





2. Solve **any five** questions. 10
- 1) Differentiate between class variable and instance variable.
  - 2) Write the use of 'new' and 'instanceof' operator.
  - 3) What is role of JIT in JVM ?
  - 4) What is Garbage collector ?
  - 5) What is method overloading ?
  - 6) What is use of final keyword ?
3. A) Solve **any two** questions. 6
- 1) Explain Datagram programming.
  - 2) Explain JVM architecture.
  - 3) Explain types of Java Applet.
- B) Write a program to display given string in reverse order. 4
4. Solve **any two** questions. 10
- 1) Write a program that demonstrates any checked exception.
  - 2) What is method overriding ? Explain with suitable example.
  - 3) Write a program that demonstrates use of 'super' keyword.
5. Solve **any two** questions. 10
- 1) What is Array ? Explain Jagged array with suitable example.
  - 2) Write an Applet to display current date on an Applet.
  - 3) Explain event model.
-





- 7) If  $r = (a/b)$  then  $L(r) = \{\underline{\hspace{2cm}}\}$ .
- a)  $\{a, b\}$                       b)  $\{a.b\}$                       c)  $\{a, ab\}$                       d) None of these
- 8) A finite automata with output has final states.
- a) True                                              b) False
- 9) TM is more powerful than PDA.
- a) True                                              b) False
- 10) In PDA one situation has only one transition then it is known as \_\_\_\_\_
- a) TM                                              b) DPDA                                              c) NPDA                                              d) Stack

2. Solve **any five** of the following :

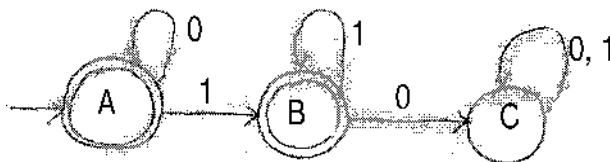
10

- 1) Construct DFA for accepting string over  $\{a, b, c\}$  which string start with 'a' and not having substring 'abc' in it.
- 2) Construct a CFG for generating  $L = \{WcW^R \mid W \in (a + b)^*\}$ .
- 3) Design Moore machine for accepting 2's complement binary number.
- 4) Give pictorial representation of PDA.
- 5) Find language for the following regular expression.
  - a)  $ab^* + ab^*$                                               b)  $(0 + 1)^* 00 (0 + 1)^*$
- 6) Define :
  - a) Alphabet                                              b) Language.

3. A) Solve **any two** :

6

- 1) Construct RE for following DFA by using Arden's theorem.



- 2) Convert the following right linear grammar to equivalent left linear grammar.

$S \rightarrow bB, B \rightarrow bC, B \rightarrow aB$

$C \rightarrow a, B \rightarrow b$



3) Convert the following NFA to its equivalent DFA.

|    | 0     | 1      |
|----|-------|--------|
| p  | {p,q} | {p}    |
| q  | {r}   | {r}    |
| r  | {s}   | $\Phi$ |
| *s | {s}   | {s}    |

B) Construct F.A. equivalent to R.E.

4

$(a/b)^* (aaa + bbb)^* (a/b)^*$

4. Solve **any two** of the following questions :

10

- 1) What is pumping lemma ? Using pumping lemma check  $\{a^n b^{n+1} \mid n \geq 1\}$  is regular or not.
- 2) Find a grammar in CNF equivalent to grammar  $E \rightarrow E+T \mid T, T \rightarrow T^*F \mid F, F \rightarrow (E) \mid a$ .
- 3) Explain closure properties of CFL with example.

5. Solve **any two** of the following questions :

10

- 1) Check whether the following grammar is ambiguous or not; if ambiguity found remove the ambiguity and rewrite an equivalent grammar.  
 $E \rightarrow E+E \mid E^*E \mid id$ .
  - 2) Construct DFA for find out given number is divisible by 3.
  - 3) Explain with example how to convert CFG into DFA.
-



|             |  |
|-------------|--|
| Seat<br>No. |  |
|-------------|--|

**B.Sc. (ECS) III (Semester – V) Examination, 2015**  
**COMPUTER SCIENCE (New)**  
**Web Technology and E-Commerce – I (Paper – V)**

Day and Date : Tuesday, 3-11-2015  
Time : 2.30 p.m. to 4.30 p.m.

Max. Marks : 50

**Instructions :** 1) **All questions are compulsory.**  
2) **All questions carry equal marks.**

1. Choose the correct alternative : 10
- 1) Default event for Checkbox control is
    - a) Click
    - b) Select
    - c) OnCheckedChange
    - d) None of these
  - 2) \_\_\_\_\_ property is used for password textbox.
    - a) password
    - b) textpass
    - c) textmode
    - d) none of these
  - 3) Postback occurs in which of the following forms
    - a) Winforms
    - b) HTML forms
    - c) Webforms
    - d) None of the above
  - 4) The first event triggers in an aspx page is
    - a) page\_init()
    - b) page\_load()
    - c) page\_click()
    - d) none of these
  - 5) Which of the following is not a way to maintain state?
    - a) view state
    - b) cookies
    - c) hidden fields
    - d) request object
  - 6) Which property determines whether a control is displayed to the user ?
    - a) Hide
    - b) Show
    - c) Visible
    - d) Enabled
  - 7) The Cancel Button property belongs to which object
    - a) Button
    - b) Form
    - c) Label
    - d) Timer
  - 8) Which method of a ListBox will remove just one item at a time ?
    - a) Items.RemoveAt
    - b) Item.RemoveAt
    - c) Items.ClearAt
    - d) Items.Clear







|          |  |
|----------|--|
| Seat No. |  |
|----------|--|

**B.Sc. (ECS) – III (Semester – V) (New) Examination, 2015**  
**COMPUTER SCIENCE (Paper – VI)**  
**Visual Programming and Application Software – I**

Day and Date : Wednesday, 4-11-2015  
Time : 2.30 p.m. to 4.30 p.m.

Max. Marks : 50

**N.B. :** 1) **All questions are compulsory.**  
2) **Figures to the right place indicate full marks.**

1. Choose the correct alternative : 10

- 1) \_\_\_\_\_ keyword is used to manually throw an exception.  
a) Try                      b) Catch                      c) Finally                      d) Throw
- 2) Generics are used to make reusable code classes to \_\_\_\_\_  
a) Decrease the code redundancy  
b) Improve code performance  
c) Improve code documentation  
d) All of the above
- 3) Sealed modifier is used to \_\_\_\_\_  
a) Prevents method overloading      b) Prevents inheritance of a class  
c) Both a) and b)                      d) None of these
- 4) The Read () function returns a single character as \_\_\_\_\_  
a) char                      b) int                      c) byte                      d) float
- 5) Structure is implicitly sealed.  
a) True                      b) False
- 6) Which of the following namespace allows us to perform multithreading in C# ?  
a) Thread                      b) System                      c) Threading                      d) Multithreading
- 7) Static field is shared among all objects created by a single class.  
a) True                      b) False



8) The enum enumerates a list of words by assigning the value starting from \_\_\_\_\_

- a) Zero                      b) One                      c) Any number      d) Null

9) The compiler checks whether a \_\_\_\_\_ parameter has been assigned a value before calling the method.

- a) ref                                      b) out  
c) both a) and b)                      d) none of these

10) Arrays are reference types.

- a) True                                      b) False

2. Answer **any five** of the following : **10**

- 1) What is the use of using statement in C# ?
- 2) What is the difference between method overloading and method overriding ?
- 3) Give the benefits of MSIL code.
- 4) What do you mean by string objects are immutable ?
- 5) What is an internal modifier ?
- 6) Give the use of static constructor.

3. A) Answer **any two** of the following : **6**

- 1) Give the limitations of an interface.
- 2) Explain the use of base keyword.
- 3) Explain the advantages of generic collection classes.

B) Write note on applications of reflection. **4**

4. Answer **any two** of the following : **10**

- 1) Why custom exceptions are used ? Write a program to demonstrate custom exception.
- 2) Explain StreamReader and StreamWriter classes in detail.
- 3) Write a program to implement an indexer using interface.

5. Answer **any two** of the following : **10**

- 1) Explain need of operator overloading with suitable example.
  - 2) What is synchronization ? Give one example.
  - 3) Write a program to reverse a given number using read-only property.
-



|             |  |
|-------------|--|
| Seat<br>No. |  |
|-------------|--|

**B.Sc. (ECS) – III (Semester – V) Examination, 2015  
DATA COMMUNICATIONS AND NETWORKING – I (Paper – I)  
(Old)**

Day and Date : Thursday, 29-10-2015

Max. Marks : 50

Time : 2.30 p.m. to 4.30 p.m.

**Instructions :** 1) *All questions are compulsory.*  
2) *Figures to the right indicate full marks.*

1. Choose the correct alternative : 10

- 1) When the angle of incidence is \_\_\_\_\_ the critical angle, the light beam bends along the interface.  
a) More than                      b) Less than                      c) Equal to                      d) Zero
- 2) \_\_\_\_\_ layer is responsible for defining the direction of transmission.  
a) Data Link                      b) Physical                      c) Transport                      d) Session
- 3) Satellite has several \_\_\_\_\_ devices that accept signal with a specified frequency range and rebroadcast it over different frequencies.  
a) Transmitter                      b) Receiver                      c) Transponder                      d) Responder
- 4) In \_\_\_\_\_ sequence of redundant bits are added at the end of data unit for detecting the errors.  
a) Parity check                      b) CRC  
c) Hamming code                      d) Checksum
- 5) A \_\_\_\_\_ connection provides a dedicated link between two devices.  
a) Point-to-Point                      b) Multipoint                      c) Primary                      d) Secondary
- 6) \_\_\_\_\_ framing method is not suitable for unicode characters.  
a) Character count                      b) Bit stuffing  
c) Byte stuffing                      d) Physical layer code violation
- 7) In \_\_\_\_\_, each node maintains a vector of minimum distances to every node.  
a) Path vector                      b) Distance vector  
c) Link state                      d) Switching

P.T.O.



- 8) In \_\_\_\_\_ topology the traffic is only in one direction.  
a) Mesh                      b) Bus                      c) Star                      d) Ring
- 9) In \_\_\_\_\_ layer Packet Discarding policy is adopted for controlling congestion.  
a) Network                      b) Data link                      c) Transport                      d) Presentation
- 10) In \_\_\_\_\_ ARQ, if a NAK is received, only the specific damaged or lost frame is retransmitted.  
a) Stop and wait                      b) Go-Back-N  
c) Selective Repeat                      d) None of the above

2. Answer the following (**any 5**) : **10**
- 1) What is a noise ?
  - 2) What is a static routing ?
  - 3) What is p-persistent method ?
  - 4) What is meant by FDM ?
  - 5) Which are the various properties of routing algorithm ?
  - 6) What is meant by jitter ?
3. A) Answer the following (**any 2**) : **6**
- 1) Mention the steps of Link State Routing.
  - 2) What is Internet working ?
  - 3) Which are the various key elements of protocol ?
- B) What is framing ? Explain framing methods in detail. **4**
4. Answer the following (**any 2**) : **10**
- 1) Why performance, reliability and security is needed in computer network ?
  - 2) Explain RS 232-C in detail.
  - 3) Explain CDMA in detail.
5. Answer the following (**any 2**) : **10**
- 1) Explain Shortest path routing in detail.
  - 2) Explain Nyquist bit rate formula.
  - 3) Explain Selective Repeat ARQ protocol.
-



|          |  |
|----------|--|
| Seat No. |  |
|----------|--|

**B.Sc. (ECS) – III (Semester – V) Examination, 2015  
(Old)  
Paper – II : DATABASE MANAGEMENT SYSTEM – I**

Day and Date : Friday, 30-10-2015  
Time : 2.30 p.m. to 4.30 p.m.

Total Marks : 50

**Instructions:** 1) *All questions are compulsory.*  
2) *Figures to the right place indicate full marks.*

1. Choose the correct alternatives. 10
- 1) A Generalization represents top-down manner.  
a) True                      b) False
  - 2) The statement in SQL which allows to change the definition of a table is \_\_\_\_\_  
a) Alter                      b) Update                      c) Select                      d) Create
  - 3) The statement containing a sub query is called a parent statement.  
a) True                      b) False
  - 4) Which of the following level of abstraction describes only part of the entire database ?  
a) Physical                      b) Logical                      c) View                      d) Conceptual
  - 5) 2NF is based on the concept of \_\_\_\_\_  
a) Semi functional dependency  
b) Full functional dependency  
c) Transitive dependency  
d) None of these
  - 6) \_\_\_\_\_ symbol is used to represent the select operation.  
a)  $\sigma$                       b)  $\pi$                       c)  $\cup$                       d)  $\alpha$
  - 7) The overall design of the database is called \_\_\_\_\_  
a) instance                      b) data                      c) schema                      d) snapshot
  - 8) Indexing a table increases the speed of execution of queries based on it.  
a) True                      b) False



9) Overall logical structure of a database can be expressed graphically by \_\_\_\_\_

- a) Records      b) Instances      c) Schemas      d) ER Diagram

10) Which of the following is a disadvantage of file management system ?

- a) Lack of data independence      b) Data redundancy  
c) Difficult to update      d) All of these

2. Answer **any five** of the following. **10**

- 1) What is relational algebra ?
- 2) Define an entity set.
- 3) List the components of DBMS.
- 4) What is a 3NF ?
- 5) Give the use of foreign key.
- 6) Give the syntax of sequence statement.

3. A) Answer **any two** of the following. **6**

- 1) Explain the concept of self join.
- 2) What are the responsibilities of DBA ?
- 3) Explain different operations on a file.

B) Write note on views with its advantages. **4**

4. Answer **any two** of the following. **10**

- 1) Describe the advantages of normalization.
- 2) Explain the terms :
  - i) Domain
  - ii) Degree.
- 3) Explain various methods of indexing.

5. Answer **any two** of the following. **10**

- 1) Explain subqueries with suitable example.
  - 2) Differentiate between 2-tier and 3-tier architecture.
  - 3) Explain Codd's rules.
-



|          |  |
|----------|--|
| Seat No. |  |
|----------|--|

**B.Sc. (ECS) – III (Semester – V) Examination, 2015**  
**COMPUTER SCIENCE (Paper – III) (Old)**  
**Core Java**

Day and Date : Saturday, 31-10-2015  
Time : 2.30 p.m. to 4.30 p.m.

Max. Marks : 50

**N.B. :** 1) **All questions are compulsory.**  
2) Figures to the **right** indicate **full** marks.

1. A) Choose the correct alternatives : 7
- 1) Which of the following is get called by garbage collector ?  
a) finally ()      b) final ()      c) finalize ()      d) finalized ()
  - 2) \_\_\_\_\_ helps us to refer to the object that invoked it.  
a) static      b) this      c) super      d) none of these
  - 3) The static methods can access \_\_\_\_\_ and \_\_\_\_\_  
a) static method, static data  
b) non-static method, static data  
c) static method, non-static data  
d) non-static method, non-static data
  - 4) In Java's terminology inherited class is called  
a) superclass      b) subclass      c) primeclass      d) None of the above
  - 5) Variables declared inside the Interface are implicitly \_\_\_\_\_ and \_\_\_\_\_  
a) final, private      b) final, void      c) final, static      d) None of the above
  - 6) A new thread can be created by using  
a) Runnable interface      b) Thread class  
c) Both a and b      d) None of these
  - 7) System out is a object of class.  
a) PrintWriter      b) PrintStream      c) Both a and b      d) None of these



- B) State **true** or **false** : **3**
- 1) Exceptions are occurred by compile-time errors.
  - 2) At any given point of time only one thread can own the monitor.
  - 3) All methods and variables in a interface are implicitly public.
2. Solve **any five** : **10**
- a) Throw clause
  - b) Garbage collector
  - c) Character streams
  - d) Vector class
  - e) Thread priority
  - f) Abstract class
3. A) Solve **any two** : **6**
- 1) How java is compiled as well as interpreted language ?
  - 2) Note on access protection achieved by using packages.
  - 3) Explain method overloading with example.
- B) Explain Java's thread model. **4**
4. Solve **any two** : **10**
- 1) What is multiple inheritance ? How Java implements it ? Explain with example.
  - 2) What is method synchronization ? Explain with example.
  - 3) Explain use of static data and static methods with example.
5. Solve **any two** : **10**
- 1) Write a program that will converts last character of each word into capital from given file.
  - 2) Explain detail differences between Abstract class and Interface.
  - 3) What is exception ? How Java deals with it.
-





|             |  |
|-------------|--|
| Seat<br>No. |  |
|-------------|--|

**B.Sc. (ECS) (Part – III) (Semester – V) Examination, 2015**  
**COMPUTER SCIENCE (Paper – IV) (Old)**  
**Theory of Computer Science**

Day and Date : Monday, 2-11-2015  
Time : 2.30 p.m. to 4.30 p.m.

Max. Marks : 50

**Instructions:** 1) **All questions are compulsory.**  
2) **Figures to the right indicate full marks.**

1. Choose correct alternatives :

10

- 1) If  $L(r) = \{a, aa, aaa, aaaa, aaaaa\}$  then  $r =$  \_\_\_\_\_  
a)  $(\epsilon+a)^*$                       b)  $(a)^5$                       c)  $(\epsilon+a)^+$                       d) None of these
- 2) Function which mapping one to one from input to next state such function is known as \_\_\_\_\_  
a) STF                                              b) MAF  
c) Both a) and b)                                      d) None of these
- 3) The \_\_\_\_\_ is denoted by capital letters in CFG.  
a) Terminal                                              b) Non-terminal  
c) Both a) and b)                                      d) String
- 4) The language of PDA is \_\_\_\_\_ language.  
a) CGL                      b) CFG                      c) CFL                      d) RL
- 5) In \_\_\_\_\_ machine output is associated with state.  
a) FA                      b) PDA                      c) Mealy                      d) Moore
- 6) The grammar  $S \rightarrow Ca \mid Bb, C \rightarrow Bb, B \rightarrow Ba \mid b$  is \_\_\_\_\_ grammar.  
a) Left-linear                                              b) Right-linear  
c) Context-free                                              d) Context-sensitive

P.T.O.





4. Solve **any two** : 10

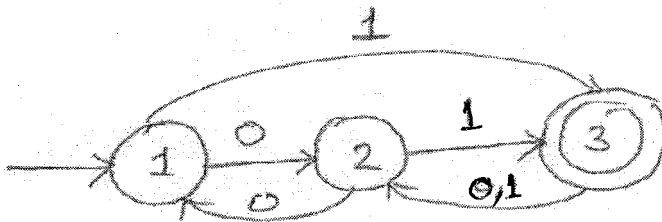
- 1) What is pumping lemma ? Using pumping lemma check  $\{a^n b^{2n+n} \mid n > 0\}$  is regular or not.
- 2) Construct a PDA accepting  $\{a^n b^n a^n \mid m, n \geq 1\}$  by null store.
- 3) Find a grammar in GNF equivalent to grammar  $S \rightarrow AB, A \rightarrow BS \mid b, B \rightarrow SA \mid a$ .

5. Solve **any two** : 10

- 1) Check whether the following grammar is ambiguous or not ; if ambiguity found remove the ambiguity and rewrite an equivalent grammar.

$$S \rightarrow ABA, A \rightarrow aA \mid \epsilon, B \rightarrow bB \mid \epsilon.$$

- 2) Construct a regular expression for following DFA using formula  $R_{ij}^k$ .



- 3) Construct a Mealy machine that accepts strings ending in '00' and '11'. Convert the same to a Moore machine.
-





- 7) The \_\_\_\_\_ validation control allows comparing a value entered into control against another control.
- a) Regular Expression                      b) Compare  
c) Compare Value                            d) Range
- 8) \_\_\_\_\_ property of Radio Button is used to make group.
- a) Group                      b) Category                      c) Class                      d) Groupname
- 9) IIS stands for \_\_\_\_\_
- a) Internet Information Server                      b) Internet Inform Server  
c) Internet Information Service                      d) Internet Information Session
- 10) For development of ASP.Net application; IIS is required.
- a) True                      b) False

2. Answer the following (**any 5**).

**10**

- 1) Explain File System location in ASP.Net.
- 2) What is Auto Post Back ? Explain in detail.
- 3) Explain Web Page life cycle.
- 4) Explain Multiview and view control.
- 5) What is use of File Upload control ? Explain with example.
- 6) Explain Day Rander event of Calendar control.

3. A) Answer the following (**any 2**).

**6**

- 1) How to upload text file ? Explain with example.
- 2) Explain Regular Expression validation control and design expression for pincode and email address.
- 3) Explain Table Control and write code to add 3 rows and 5 columns at runtime.

B) Which technique is used to transfer result to another page ? Explain with example.

**4**



4. Answer the following (**any 2**). **10**

- 1) What is master pages ? Explain how to create nested master pages and how to use themes.
- 2) What are page directives ? Explain any five page directives used in ASP.Net.
- 3) Design web page which demonstrate ImageMap Control. (Create HotSpots using compile time and runtime method).

5. Answer the following (**any 2**). **10**

- 1) State advantages and disadvantages of Client side and server side state management. Explain server side state management techniques.
  - 2) What is use of Resource files ? Explain global resource and local resource with example.
  - 3) Explain CheckBoxList and RadioButtonList. Explain how to add items in these list using array and database.
-



|             |  |
|-------------|--|
| Seat<br>No. |  |
|-------------|--|

**B.Sc. (ECS) – III (Semester – V) Examination, 2015**  
**Paper – VI : VISUAL PROGRAMMING AND APPLICATION**  
**SOFTWARE – I (Old)**

Day and Date : Wednesday, 4-11-2015  
Time : 2.30 p.m. to 4.30 p.m.

Max. Marks : 50

**Instructions :** 1) *All questions are compulsory.*  
2) *Figures to the right indicate full marks.*

1. Choose the correct alternative : 10
- 1) How do you prevent a class from being inherited ?  
a) Make it as abstract                      b) Make it as static  
c) Make it as sealed                         d) Make it as partial
  - 2) \_\_\_\_\_ of following is value type.  
a) Array                      b) Delegate                      c) Enum                      d) Class
  - 3) The \_\_\_\_\_ block is executing a given set of statements, whether the exception is thrown or not.  
a) Try                      b) Finally                      c) Throw                      d) None of these
  - 4) Collection of classes is known as \_\_\_\_\_  
a) Events                      b) Namespace                      c) Delegates                      d) Objects
  - 5) How to find total number of elements present in Array List called Ary ?  
a) Ary.count                      b) Ary.Capacity                      c) Ary.Size                      d) Ary.Length
  - 6) \_\_\_\_\_ of the following method used to read block or array of bytes from files.  
a) Read()                      b) ReadByte()                      c) ReadLine()                      d) ReadKey()
  - 7) \_\_\_\_\_ keyword is used to declare Indexer.  
a) Indexer                      b) Index                      c) Base                      d) This
  - 8) \_\_\_\_\_ method of Thread class is used to suspend a thread for specific period of time.  
a) Suspend()                      b) Sleep()                      c) Stop()                      d) Terminates()



- 9) The difference between Convert.ToString() and ToString() is \_\_\_\_\_
- a) Both accepts null values
  - b) Both do not accept null values
  - c) Convert.ToString() accept null whereas ToString() do not accept null
  - d) Convert.ToString() do not accept null whereas ToString() accept null
- 10) Boxing is computationally more expensive process than unboxing
- a) True
  - b) False

2. Answer the following (**any 5**) : **10**
- 1) Define Garbage Collection.
  - 2) What is Namespaces ?
  - 3) Give the meaning of Reference data type.
  - 4) What is use of params keyword ?
  - 5) Give the advantage of foreach loop with example.
  - 6) What is meaning and uses of this keyword ?
3. A) Answer the following (**any 2**) : **6**
- 1) Explain constructor and its types with example.
  - 2) Explain DriveInfo and DirectoryInfo Classes.
  - 3) Explain Abstract Classes with example.
- B) Explain different services provided by CLR. **4**
4. Answer the following (**any 2**) : **10**
- 1) What is operator overloading ? Explain with example.
  - 2) What are values in FileMode enumeration ? Explain any two with example.
  - 3) Explain HashTable with example.
5. Answer the following (**any 2**) : **10**
- 1) Why custom exceptions are used ? Write a program to demonstrate custom exception.
  - 2) Explain behaviour of constructor in inheritance. Give example.
  - 3) Explain Thread Priorities with example.
-







- 9) Real time protocol provides
- a) Unreliable delivery
  - b) Reliable delivery
  - c) No error checking
  - d) Physical bit transmission
- 10) A proxy firewall filters at the network layer.
- a) True
  - b) False
2. Answer **any five** of the following : **10**
- 1) How to rename and delete user accounts in windows 2003 server ?
  - 2) What is INN server ?
  - 3) What is meant by encryption and decryption ?
  - 4) What is meant by audio compression ?
  - 5) What is meant by VPN ?
  - 6) What is meant by binary and dotted decimal notation of IP address ?
3. A) Answers **any two** of the following : **6**
- 1) Explain www in short.
  - 2) Explain limitations of Firewall.
  - 3) Which are the various recommended partition of Linux server ?
- B) Explain applications of Bluetooth. **4**
4. Answer **any two** of the following : **10**
- 1) Explain Gateways in detail.
  - 2) Explain entity authentication in detail.
  - 3) Explain database server of windows 2003 server in detail.
5. Answer **any two** of the following : **10**
- 1) Explain RARP in detail.
  - 2) Explain Samba server in detail.
  - 3) What is Firewall ? Explain application Gateway in detail.
-











|          |  |
|----------|--|
| Seat No. |  |
|----------|--|

**B.Sc. (ECS) – III (Semester – VI) Examination, 2015**  
**COMPUTER SCIENCE (Paper – IV)**  
**Compiler Construction**

Day and Date : Monday, 16-11-2015

Max. Marks : 50

Time : 2.30 p.m. to 4.30 p.m.

- Instructions :** 1) **All questions are compulsory.**  
2) **Figures to the right indicates full marks.**

1. Choose the correct alternative : **10**

- 1) The \_\_\_\_\_ resolves external memory addresses, where the codes in one file may refer to a location in another file.
  - a) loader
  - b) pre-processor
  - c) linker
  - d) translator
- 2) A \_\_\_\_\_ is a description of the form that the lexemes of a token may take.
  - a) token
  - b) attribute value
  - c) lexeme
  - d) pattern
- 3) \_\_\_\_\_ errors include type mismatches between operators and operands.
  - a) Semantic
  - b) Syntactic
  - c) Lexical
  - d) Logical
- 4) A \_\_\_\_\_ is a context-free grammar together with attributes and rules.
  - a) Syntax-Directed Definition (SDD)
  - b) S-attributed SDD
  - c) L-attributed SDD
  - d) All of above
- 5) Procedure calls and returns are usually managed by a runtime stack called \_\_\_\_\_
  - a) Control stack
  - b) Garbage collection
  - c) Activation tree
  - d) Activation record







3. A) Answer **any two** of the following : **6**
- 1) Explain natural loop with example.
  - 2) Give the common three-address statements used in the intermediate languages.
  - 3) When the lexical errors are occurred ? How to recover it ?
- B) Explain backpatching. **4**
4. Answer **any two** of the following : **10**
- 1) Discuss phases of compiler.
  - 2) Explain inherited attribute on the parse stack with example.
  - 3) What is left recursion ? How to eliminate it ? Explain with example.
5. Answer **any two** of the following : **10**
- 1) Discuss an activation record.
  - 2) Explain an issues in the design of code generator.
  - 3) Consider the grammar,  
stmt  $\rightarrow$  if expr then stmt  
          | if expr then stmt clse stmt  
          | other
- where 'other' stands for any other statement.  
check whether the given grammar is ambiguous or not; if found ambiguous, remove the ambiguity and write the equivalent unambiguous grammar.
-





- 6) In e-commerce, time required for business transaction is more.  
a) True                      b) False
- 7) \_\_\_\_\_ is a process to converting plain text into cipher text.  
a) Decryption              b) Encryption              c) EDI                      d) E-commerce
- 8) Execution and settlement phases are combined into \_\_\_\_\_ type of transaction.  
a) Cash                      b) Credit                      c) Repeat                      d) None of these
- 9) Default value for Edit Index property is \_\_\_\_\_ in Gridview.  
a) 0                          b) 1                          c) -1                          d) number of rows
- 10) E-market deals with all phases of trade cycle.  
a) True                      b) False

2. Answer the following (**any 5**) :

**10**

- a) Authorization
- b) Supply chain
- c) Airline booking system
- d) Log in Name control
- e) Data Row object
- f) Virtual Auctions.

3. a) Answer the following (**any 2**) :

**6**

- 1) Definition of e-commerce.
- 2) Explain first moves advantage.
- 3) Explain Data Adaptes with example.

b) Explain strategy formulation and implementation planning in detail.

**4**



4. Answer the following (**any 2**) : **10**
- a) Design web page which insert and select record.
  - b) Explain Porter's value chain model.
  - c) Explain different technique for delivering of goods.
5. Answer the following (**any 2**) : **10**
- a) Design web page which insert new user and new role by using user management and role management technique.
  - b) Explain benefits of EDI in detail.
  - c) Explain trade cycle in detail.
-



