

Id	1
Question	Positive classroom communication leads to-----.
A	Coercion
B	Submission
C	Confrontation
D	Persuasion
Answer	D

Id	2
Question	The term 'Grapevine' is also known as -----.
A	Informal communication
B	Vertical communication
C	Horizontal communication
D	Downward communication
Answer	A

Id	3
Question	The content of the communication is called
A	Noise
B	Media
C	Jargon
D	A message
Answer	D

Id	4
Question	Which of the following is not a medium of transmission?
A	Memos
B	Policy statements
C	Discussions
D	None of the above
Answer	D

Id	5
Question	Downward communication flows from ----- to -----.
A	Upper to lower
B	Lower to upper
C	horizontal
D	Diagonal
Answer	A

Id	6
Question	When a person receives a message, it is his responsibility to provide the sender-----.
A	Perception
B	Feedback
C	Self concept
D	Nonverbal Clues
Answer	B

Id	7
Question	----- communication includes tone of voice, body language, facial expressions, etc.
A	Non verbal
B	Verbal
C	Letter
D	Notice
Answer	A

Id	8
Question	The ----- is the person who transmits the message.
A	Receiver
B	Driver
C	Sender
D	cleaner
Answer	C

Id	9
Question	The study of communication through touch is -----.
A	Chronemics
B	Haptics
C	Proxemics
D	Semantics
Answer	B

Id	10
Question	Which of the following is not the barrier in effective communication ?
A	Language
B	Defensiveness
C	Filtering
D	Effective Channel
Answer	D

Id	11
Question	In e-mail, BCC stands for -----.
A	Brain carbon copy
B	Black carbon copy
C	Blind carbon copy
D	All the above
Answer	C

Id	12
Question	Operating system is a
A	Language
B	Programmer
C	Application software
D	System software
Answer	D

Id	13
Question	Which key should be pressed to start a new paragraph in MS-Word?
A	Down cursor key
B	Enter key
C	Shift +enter
D	Control +enter
Answer	B

Id	14
Question	LAN stands for
A	Local and national
B	Local area network
C	Large area network
D	Live area network
Answer	B

Id	15
Question	Facebook was founded by
A	Steve Jobs
B	Webber
C	Mark Zuckerberg
D	Tolmon Macro
Answer	C

Id	16
Question	Which of the following website type is used to create beautiful animations?
A	E-commerce
B	Dynamic
C	Static
D	Flash
Answer	D

Id	17
Question	Process of copying file from remote server to local drive is called-----.
A	Uploading
B	Refreshing
C	Downloading
D	Browsing
Answer	C

Id	18
Question	Word press can be called as-----.
A	Static website
B	Dynamic website
C	E commerce website
D	Content managed website
Answer	D

Id	19
Question	The impact factor (IF) or journal impact factor (JIF) of an academic journal is a measure reflecting the yearly average number of-----.
A	Values
B	Citations
C	Publications
D	Evaluations
Answer	B

Id	20
Question	Webinar features-----.
A	Display slides
B	Stream video
C	Record everything
D	All the above
Answer	D

Id	21
Question	An inductive theory is one that-----.
A	Involves testing an explicitly defined hypothesis
B	Does not allow for findings to feed back into the stock of knowledge.
C	Uses quantitative methods whenever possible
D	Allows theory to emerge out of the data.
Answer	A

Id	22
Question	Cross cultural studies are an example of-----.
A	Case study design
B	Comparative design
C	Experimental design
D	Longitudinal design
Answer	B

Id	23
Question	Which of the following should be included in a research proposal?
A	Your academic status and experience
B	The difficulties you encountered with your previous reading on the topic
C	Your choice of research methods and reasons for choosing them
D	All of the above
Answer	C

Id	24
Question	When accessing the internet, which of these steps is the most essential?
A	Recording the full URL
B	Nothing the access dates
C	Downloading material to be referenced
D	They are all equally important
Answer	D

Id	25
Question	Quantitative research has been criticized because:
A	The measurement process suggests a spurious and artificial sense of accuracy
B	The reliance on instruments and procedures makes it high in ecological validity
C	It underestimates the similarities between objects in the natural and social worlds
D	All of the above
Answer	A

Id	26
Question	An open question is one that:
A	Allows respondents to answer in their own terms
B	Does not suggest or provide a limited range of responses
C	Can help to generate answers for closed questions
D	All of the above
Answer	D

Id	27
Question	SPSS means
A	Social package for the social Sciences
B	Statistical package for the social Sciences
C	Statistical parcel for the social Sciences
D	Scientific package for the social Sciences
Answer	B

Id	28
Question	A bibliography is -----.
A	A list of all of the sources used in the process of research
B	A checklist of all the books
C	A checklist of all the journals and interviews
D	A list of all the persons you interviewed in the process of research
Answer	A

Id	29
Question	URKUND is -----.
A	System for handling the problem with data analysis
B	System for handling the problem with data collection
C	System for handling the problem with plagiarism
D	System for handling the problem with data updating
Answer	C

Id	30
Question	A reservoir of Indian Theses is -----.
A	Shodhganga
B	Shodhsandhya
C	Shodhprayag
D	None of the above
Answer	A

Id	31
Question	Z,S,W,O,T,K,Q,G?,?
A	N,C
B	N,D
C	O,C
D	O,D
Answer	A

Id	32
Question	AZ,GT,MN,-----,YB.
A	JH
B	SH
C	SK
D	TS
Answer	B

Id	33
Question	Odometer: Mileage:: Compass:-----.
A	Speed
B	Direction
C	Rotation
D	Angle
Answer	B

Id	34
Question	Medicine: Sickness:: Book:-----.
A	Document
B	Knowledge
C	Ignorance
D	Author
Answer	C

Id	35
Question	Four words are given, out of which three are same in a certain way while the rest one is different. Find out the different one.
A	Square
B	Triangle
C	Area
D	Rectangle
Answer	C

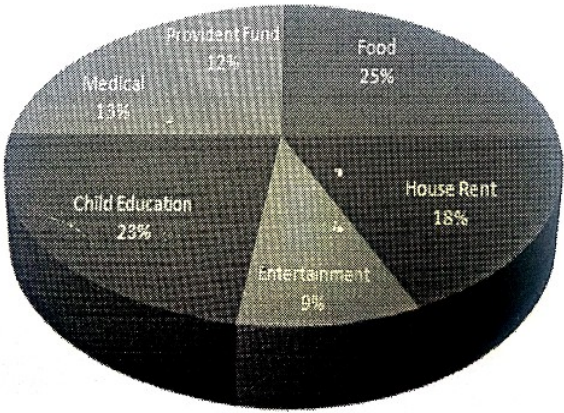
Id	36
Question	Four words are given, out of which three are same in a certain way while the rest one is different. Find out the different one.
A	Fish and aquarium
B	Student and teacher
C	Bird and nest
D	Criminals and prison
Answer	B

Id	37
Question	8,20,36,56,-----.
A	80
B	100
C	64
D	84
Answer	A





Id	38
Question	3,6,8,16,18,-----.
A	28
B	36
C	54
D	34
Answer	B

Id	39
Question	If S is the brother of N, the sister of N is M, the brother of P is J and the daughter of S is P then who is the uncle of J?
A	S
B	M
C	J
D	N
Answer	D

Id	40
Question	A is the mother of B and C. If d is the husband of C. What A is to D.
A	Mother
B	Sister
C	Mother- in- law
D	Aunt
Answer	C

Id	41 to 44														
Question Type	Comprehension														
Main Text	<p>The pie chart given here represents the domestic expenditure of a family in percent. Study the chart and answer the following questions if the total monthly income of the family is Rs. 33,650</p> <p style="text-align: center;">Expenditure of Family</p>  <table border="1" style="margin-left: auto; margin-right: auto;"> <caption>Expenditure of Family Data</caption> <thead> <tr> <th>Category</th> <th>Percentage</th> </tr> </thead> <tbody> <tr> <td>Food</td> <td>25%</td> </tr> <tr> <td>House Rent</td> <td>18%</td> </tr> <tr> <td>Child Education</td> <td>23%</td> </tr> <tr> <td>Medical</td> <td>13%</td> </tr> <tr> <td>Entertainment</td> <td>9%</td> </tr> <tr> <td>Provident Fund</td> <td>12%</td> </tr> </tbody> </table>	Category	Percentage	Food	25%	House Rent	18%	Child Education	23%	Medical	13%	Entertainment	9%	Provident Fund	12%
Category	Percentage														
Food	25%														
House Rent	18%														
Child Education	23%														
Medical	13%														
Entertainment	9%														
Provident Fund	12%														
ID	41														
Question	The house rent per month is:														
A	Rs. 6000														
B	Rs. 6152														
C	Rs. 6057														
D	Rs. 6048														
Answer	C														
ID	42														
Question	The annual saving in the form of provident fund would be														
A	Rs. 48456														
B	Rs. 48540														
C	Rs. 44856														
D	Rs. 45480														
Answer	A														

ID	43
Question	After provident fund deductions and payment of house rent, the total monthly income of the family remains:
A	Rs. 23545
B	Rs. 24435
C	Rs. 23555
D	Rs. 25355
Answer	C
ID	44
Question	The total amount per month, the family spends on food and entertainment combined together, is :
A	Rs. 11432
B	Rs. 11441
C	Rs. 12315
D	Rs. 12443
Answer	B

Id	45
Question	Which of the following correctly represents elephants, Wolves and animals? <p>A.  B. </p> <p>C.  D. </p>
A	A
B	B
C	C
D	D
Answer	A
Unit	Pet_45

Id	46
Question	If in a code language, COULD is written as BNTKC and MARGIN is written as LZQFHM, how will MOULDING be written in that code?
A	HMFINTK
B	LNKTCHMF
C	LNTKCHMF
D	NITKHCMF
Answer	C
Unit	Pet_45

Id	47
Question	In a certain code, MONKEY is written as XDJMNL. Hoe is TIGER written in that code?
A	QDFHS
B	SDFHS
C	SHFDQ
D	UJHFS
Answer	A
Unit	Pet_45

Id	48
Question	<p>Statement :</p> <p>population increase coupled with depleting resources is going to be the scenario of many developing countries in days to come.</p> <p>Conclusions:</p> <p>I. the population of developing countries will not continue to increase in future II. it will be very difficult for the governments of developing countries to provide decent quality of life.</p>
A	If only conclusion I follows
B	If only conclusion II follows
C	If either I or II follows
D	If neither I nor II follows
Answer	B
Unit	Pet_45

Id	49-50																																		
Question Type	Comprehension																																		
Main Text	<p>(Direction for question numbers 49 and 50): Study the table and answer the questions :</p> <p>Year</p> <table border="1"> <thead> <tr> <th></th> <th>English</th> <th></th> <th>Maths</th> <th></th> <th>Science</th> <th></th> <th>social</th> <th>Science</th> </tr> <tr> <th></th> <th>High.</th> <th>Ave.</th> <th>High.</th> <th>Ave.</th> <th>High.</th> <th>Ave.</th> <th>High.</th> <th>Ave.</th> </tr> </thead> <tbody> <tr> <td>2007</td> <td>80</td> <td>70</td> <td>94</td> <td>60</td> <td>89</td> <td>70</td> <td>65</td> <td>55</td> </tr> </tbody> </table>									English		Maths		Science		social	Science		High.	Ave.	High.	Ave.	High.	Ave.	High.	Ave.	2007	80	70	94	60	89	70	65	55
	English		Maths		Science		social	Science																											
	High.	Ave.	High.	Ave.	High.	Ave.	High.	Ave.																											
2007	80	70	94	60	89	70	65	55																											

	2008	82	65	85	62	95	64	66	58
	2009	71	56	92	68	97	68	68	48
	2010	75	52	91	64	92	75	77	58
ID	49								
Question	What is the overall average of marks in the four subjects in the years 2009?								
A	63								
B	64								
C	65								
D	60								
Answer	D								
ID	50								
Question	Supposing that there were 40students in science in the year 2009. How much total of marks did they receive combined together?								
A	2800								
B	2720								
C	2560								
D	3000								
Answer	B								